

いん

丨

いち

×

いち

丨

いち

が

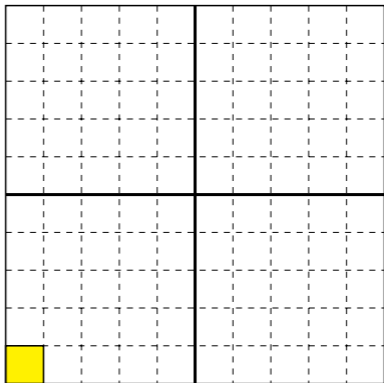
=

が

いち

丨

いち



いん

1

いち

×

に

2

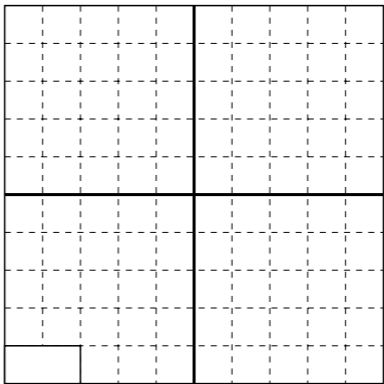
に

が

=

が

?



いん

1

いち

×

に

2

に

が

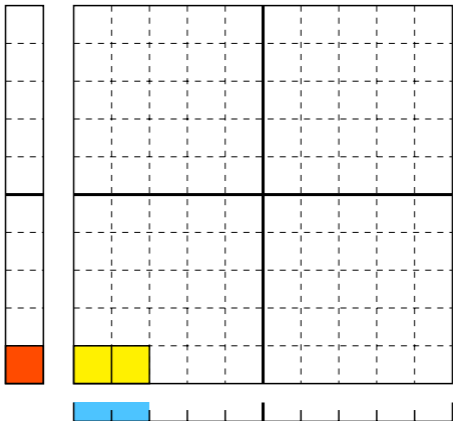
=

が

に

2

に



いん

1

いち

×

さん

3

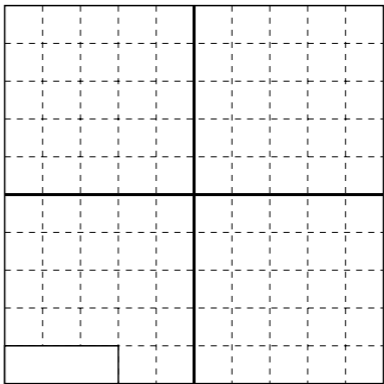
さん

が


=

が

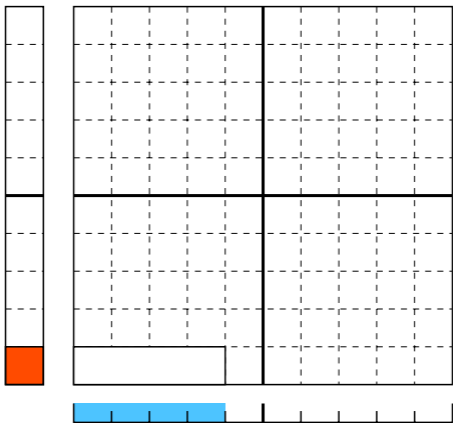
?



いん さん が さん
| × 3 = 3
いち さん が さん



いん し が
| × 4 = ?
いち よん が



いん

1

いち

×

し

4

よん

が

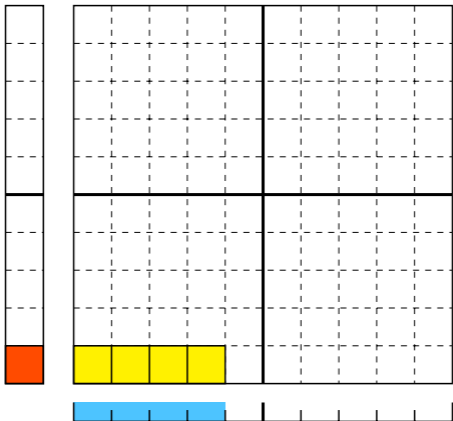
=

が

し

4

よん



いん

1

いち

×

ご

5

ご

が

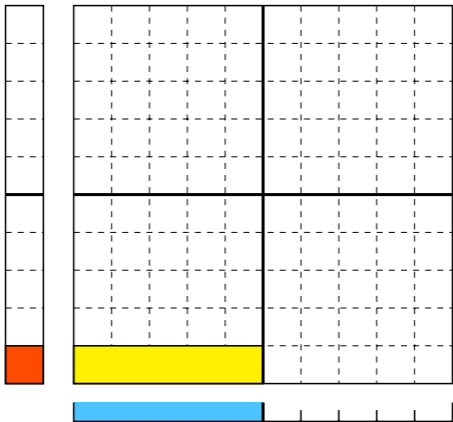
=

が

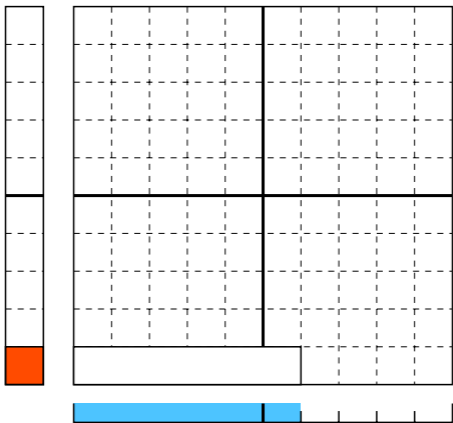
ご

5

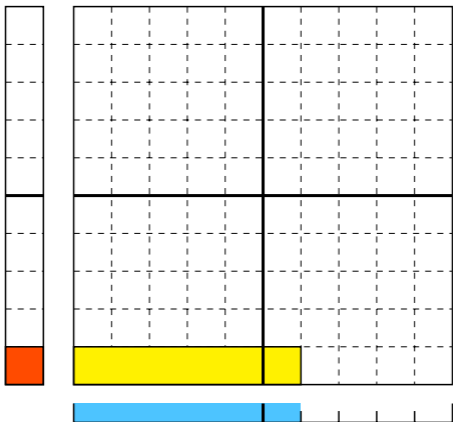
ご



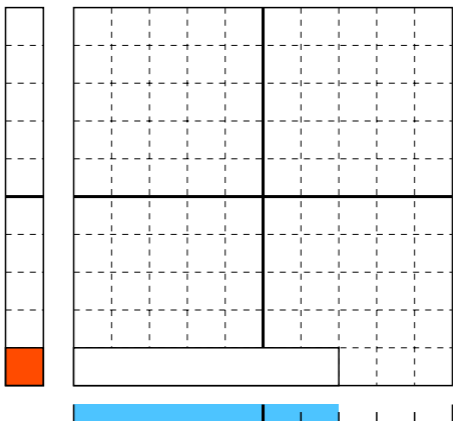
いん ろく が
| × 6 = ?
いち ろく が



いん ろく が ろく
| × 6 = 6
いち ろく が ろく



いん しち が
| × 7 = ?
いち なな が



いん

1

いち

×

しち

7

なな

が

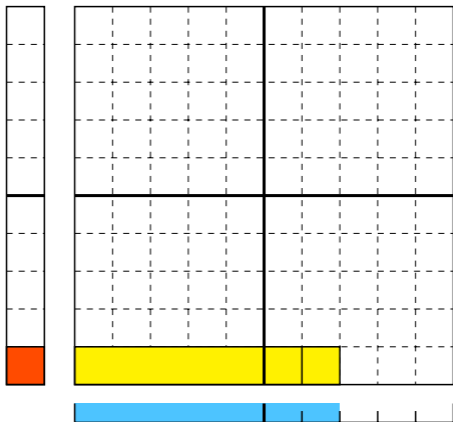
=

が

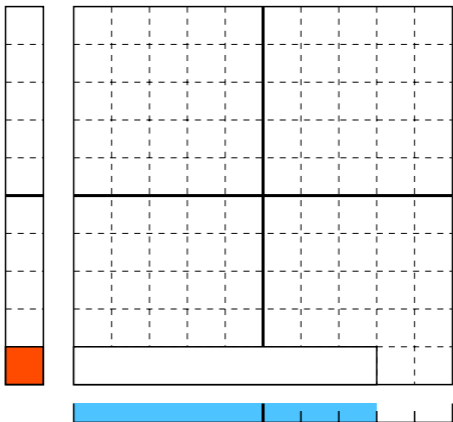
しち

7

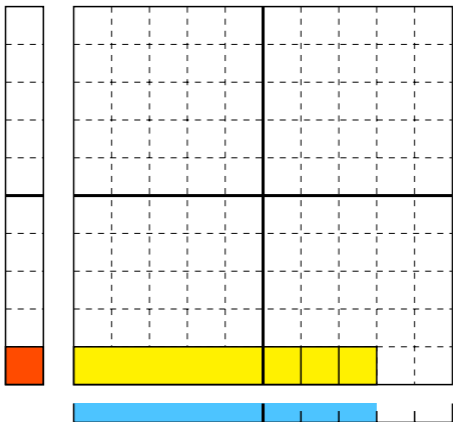
なな



いん はち が
| × 8 = ?
いち はち が



いん はち が はち
| × 8 = 8
いち はち が はち



いん

く

が

丨

×

9

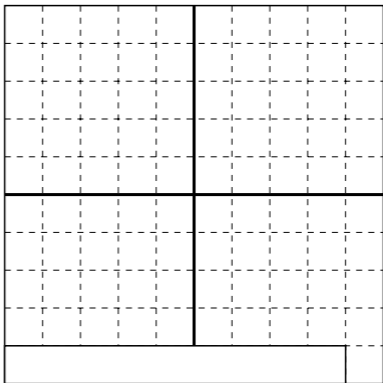
=

?

いち

きゅう

が



いん

丨

いち

×

く

9

きゅう

が

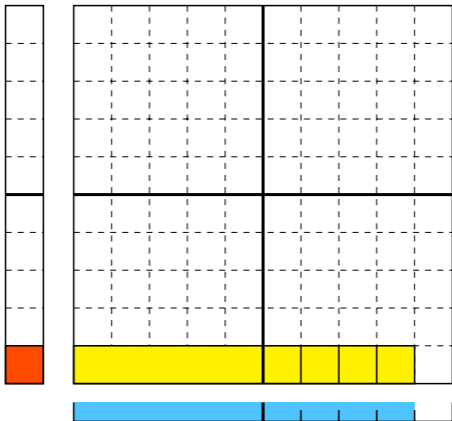
=

が

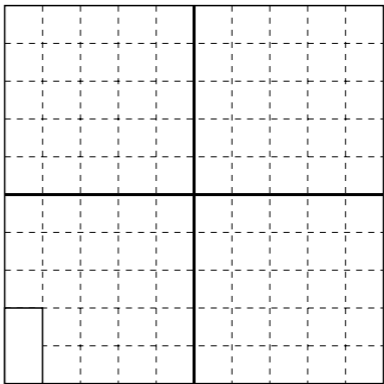
く

9

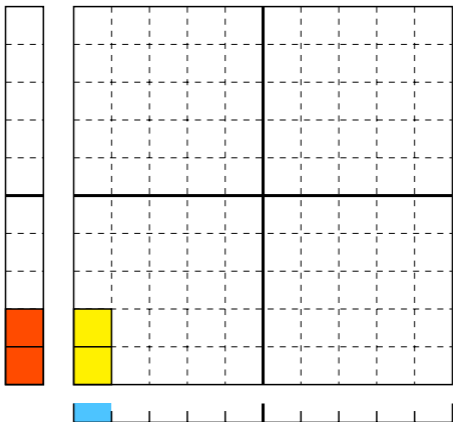
きゅう



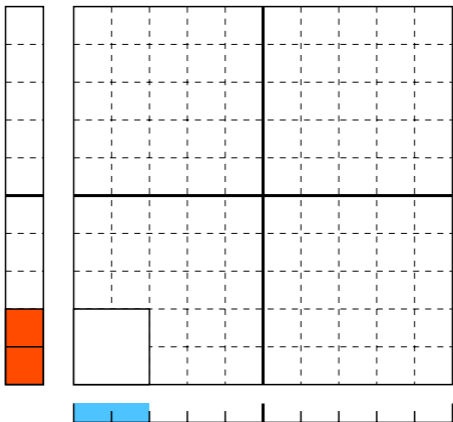
に 2 × いち 1 が = ?



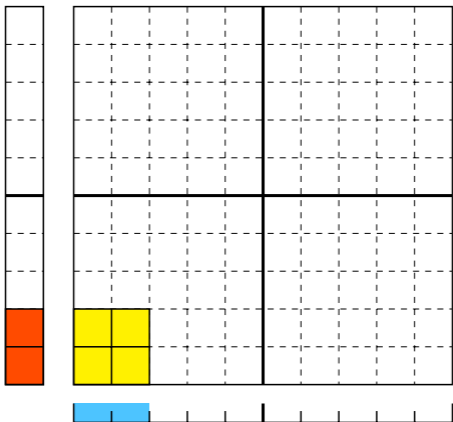
に 2 × 1 = 2 に
いち が



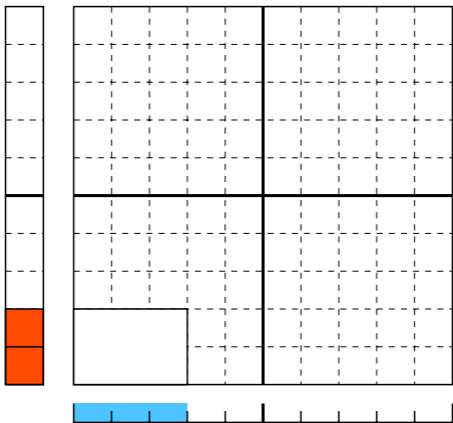
$$\begin{array}{c} \text{に} \\ 2 \\ \text{に} \end{array} \times \begin{array}{c} \text{にん} \\ 2 \\ \text{に} \end{array} = \begin{array}{c} \text{が} \\ ? \\ \text{が} \end{array}$$



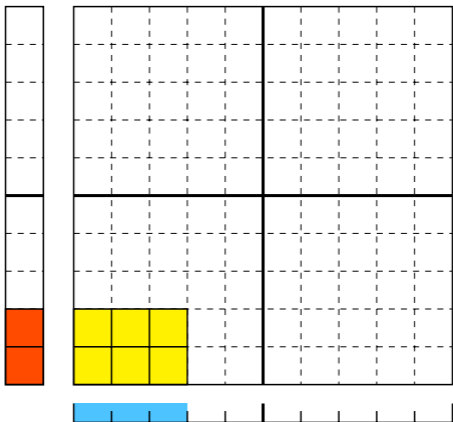
$$\begin{array}{cccc} \text{に} & & \text{にん} & \text{が} & \text{し} \\ 2 & \times & 2 & = & 4 \\ \text{に} & & \text{に} & \text{が} & \text{よん} \end{array}$$



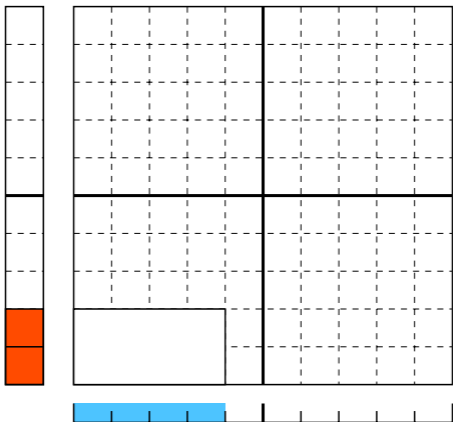
に さん が
 $2 \times 3 = ?$



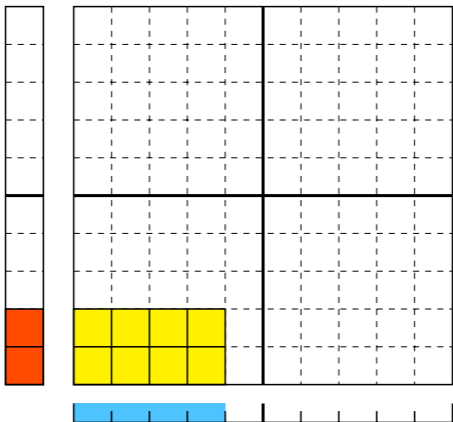
に さん が ろく
 $2 \times 3 = 6$



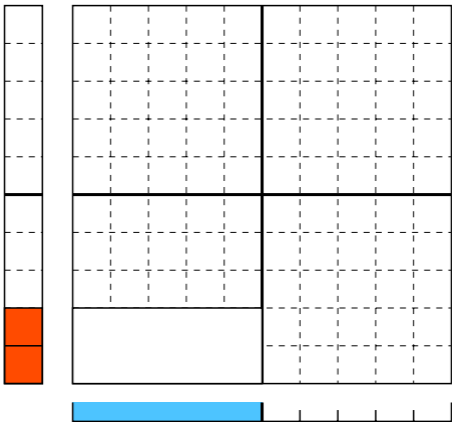
に し が
2 × 4 = ?
に よん が



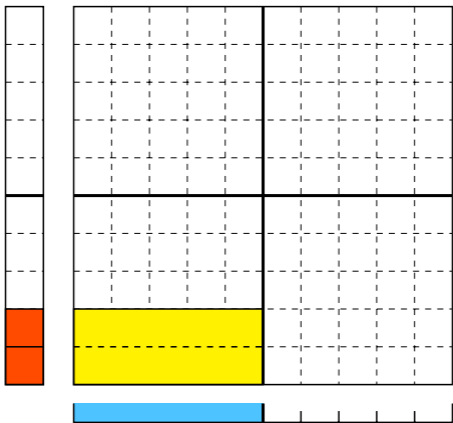
に し が はち
2 × 4 = 8
に よん が はち



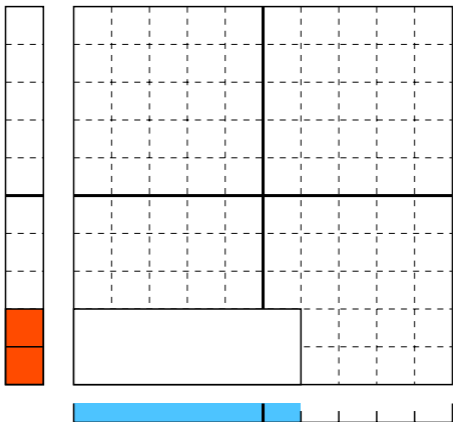
$$\overset{\text{に}}{2} \times \overset{\text{ご}}{5} = ?$$



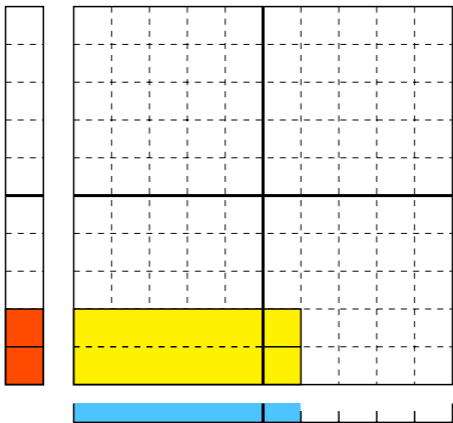
$$\begin{array}{c} \text{に} \\ 2 \end{array} \times \begin{array}{c} \text{ご} \\ 5 \end{array} = \begin{array}{c} \text{じゅう} \\ 10 \end{array}$$



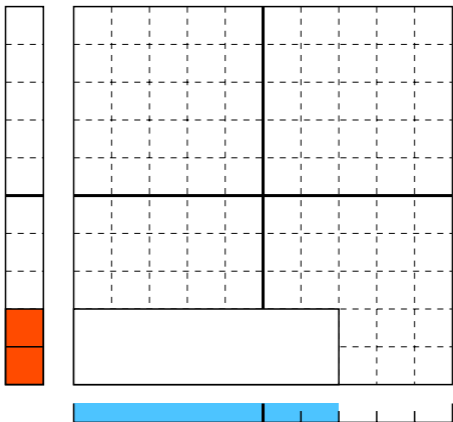
$$\overset{\text{に}}{2} \times \overset{\text{ろく}}{6} = ?$$



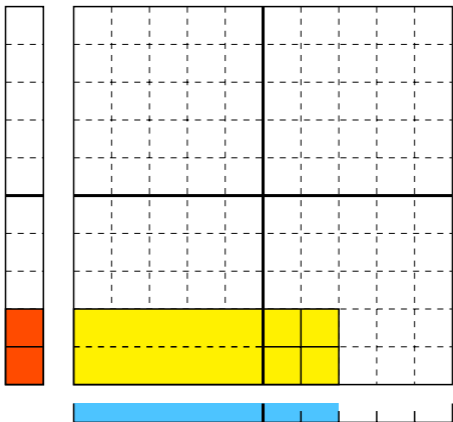
$$\begin{array}{c} \text{に} \\ 2 \end{array} \times \begin{array}{c} \text{ろく} \\ 6 \end{array} = \begin{array}{c} \text{じゅうに} \\ 12 \end{array}$$



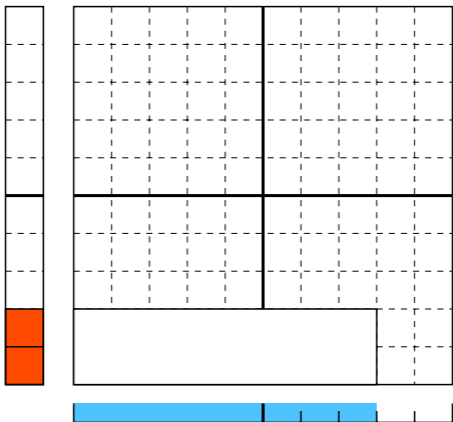
$$\begin{array}{c} \text{に} \\ 2 \\ \text{に} \end{array} \times \begin{array}{c} \text{しち} \\ 7 \\ \text{なな} \end{array} = ?$$



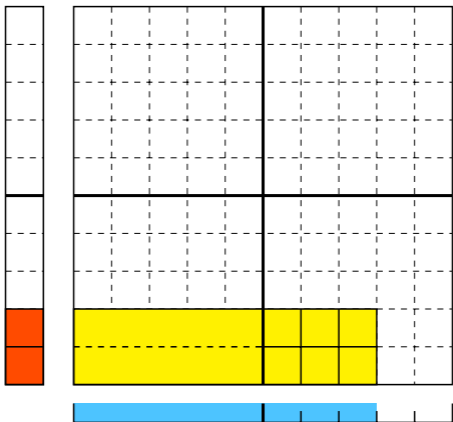
$$\begin{array}{ccc}
 \text{に} & & \text{しち} & & \text{じゅうし} \\
 2 & \times & 7 & = & 14 \\
 \text{に} & & \text{なな} & & \text{じゅうよん}
 \end{array}$$



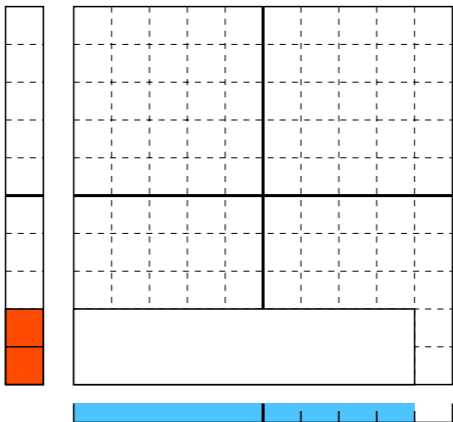
$$\overset{\text{に}}{2} \times \overset{\text{はち}}{8} = ?$$



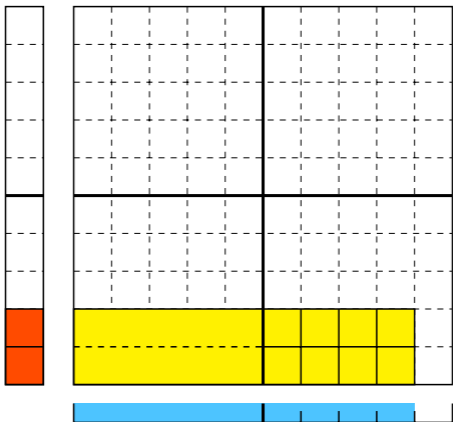
に はち じゅうろく
 $2 \times 8 = 16$



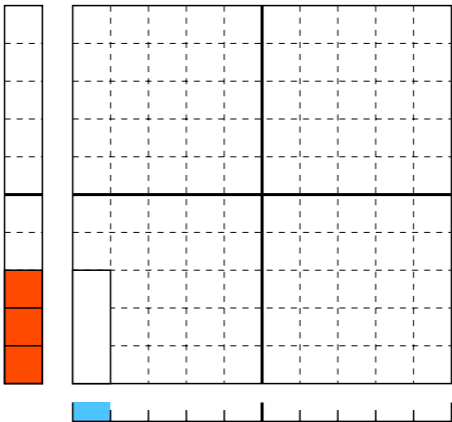
$$\begin{array}{c} \text{に} \\ 2 \\ \text{に} \end{array} \times \begin{array}{c} \text{く} \\ 9 \\ \text{きゅう} \end{array} = ?$$



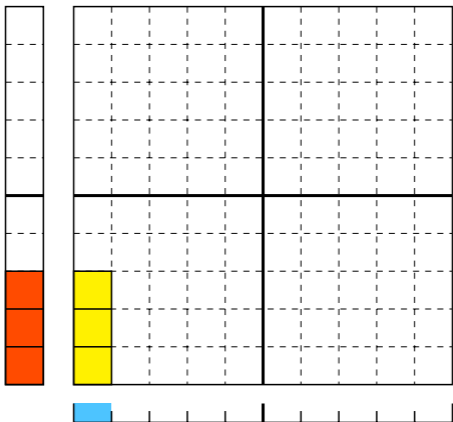
$$\begin{array}{ccccccc}
 & \text{に} & & \text{く} & & \text{じゅうはち} & \\
 2 & \times & 9 & = & 18 & & \\
 \text{に} & & \text{きゅう} & & \text{じゅうはち} & &
 \end{array}$$



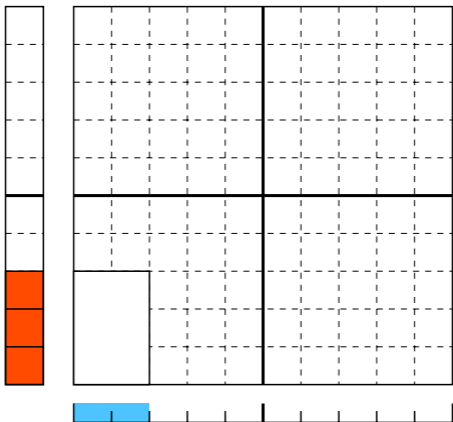
さん 3 × いち 1 = が ?



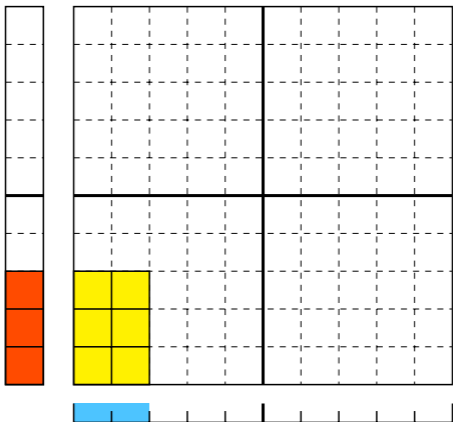
$$\begin{array}{ccccccc} \text{さん} & & \text{いち} & & \text{が} & & \text{さん} \\ 3 & \times & 1 & = & 3 & & \end{array}$$



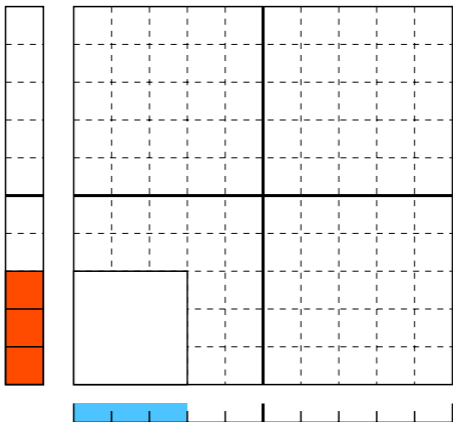
$$\overset{\text{さん}}{3} \times \overset{\text{に}}{2} = \overset{\text{が}}{?}$$



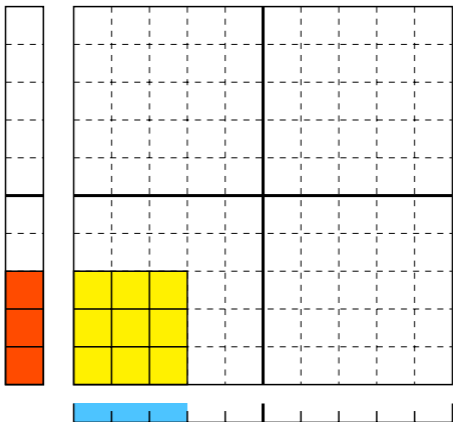
$$\begin{array}{cccc} \text{さん} & & \text{に} & \text{が} & \text{ろく} \\ 3 & \times & 2 & = & 6 \end{array}$$



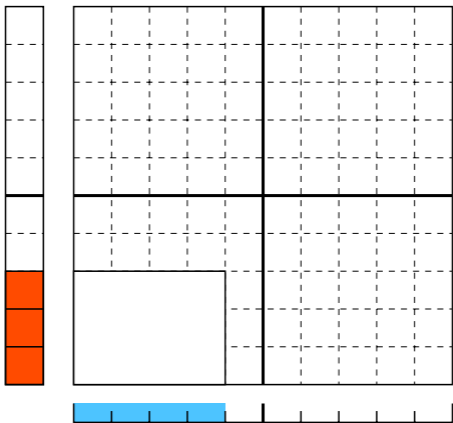
$$\begin{array}{c} \text{さ} \\ 3 \\ \text{さん} \end{array} \times \begin{array}{c} \text{ざん} \\ 3 \\ \text{さん} \end{array} = \begin{array}{c} \text{が} \\ \\ \text{が} \end{array} ?$$



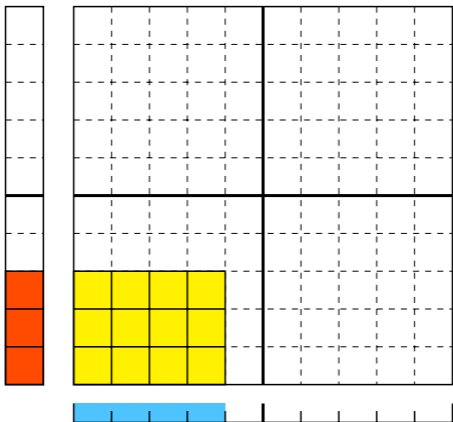
$$\begin{array}{cccc} \text{さ} & & \text{ざん} & \text{が} & \text{く} \\ 3 & \times & 3 & = & 9 \\ \text{さん} & & \text{さん} & \text{が} & \text{きゆう} \end{array}$$



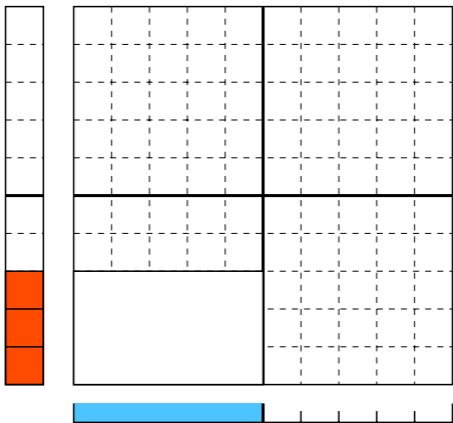
$$\begin{array}{c} \text{さん} \\ 3 \\ \text{さん} \end{array} \times \begin{array}{c} \text{し} \\ 4 \\ \text{よん} \end{array} = ?$$



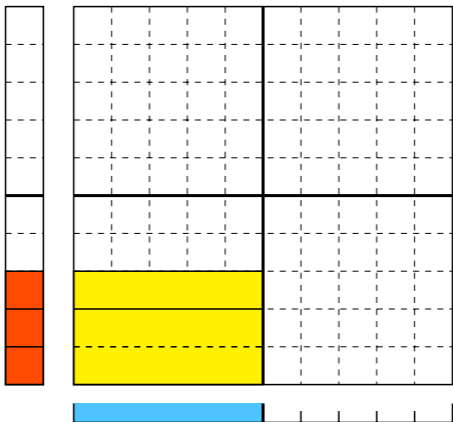
$$\begin{array}{c} \text{さん} \\ 3 \\ \text{さん} \end{array} \times \begin{array}{c} \text{し} \\ 4 \\ \text{よん} \end{array} = \begin{array}{c} \text{じゅうに} \\ 12 \\ \text{じゅうに} \end{array}$$



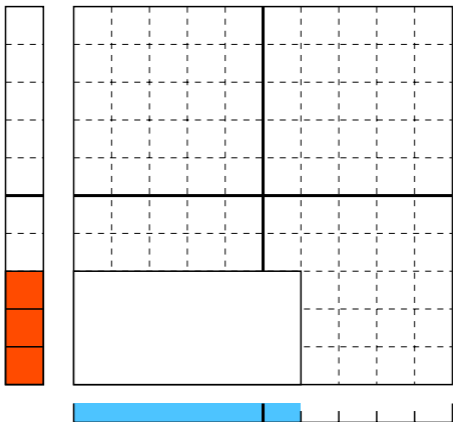
$$\overset{\text{さん}}{3} \times \overset{\text{ご}}{5} = ?$$



$$\overset{\text{さん}}{3} \times \overset{\text{ご}}{5} = \overset{\text{じゅうご}}{15}$$



さぶ
3 × 6 = ?
さん ろく



さん

3

さん

×

ろく

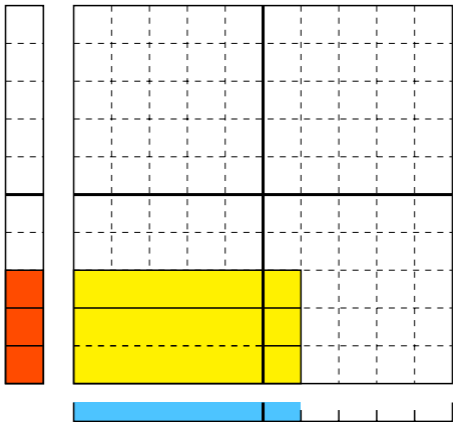
6

ろく

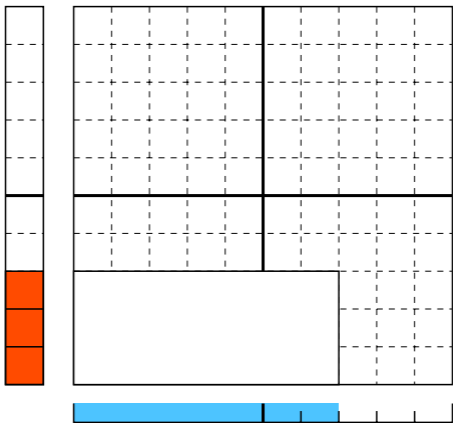
じゅうはち

= 18

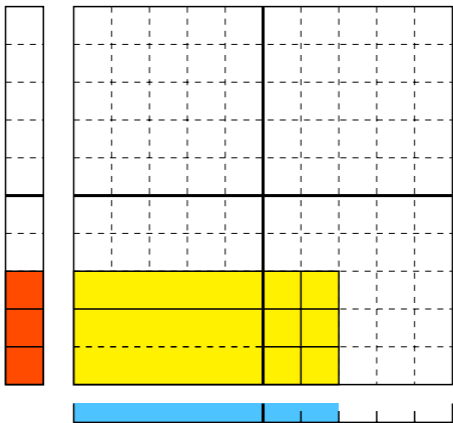
じゅうはち



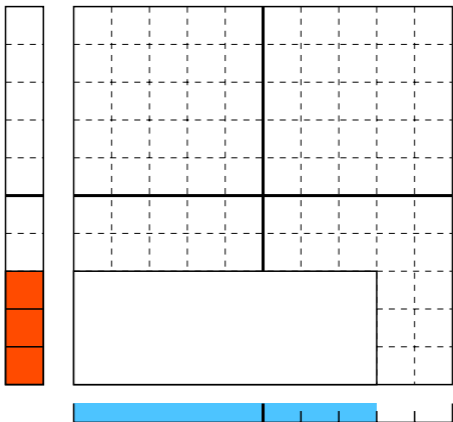
さん
3 × 7 = ?
さん 七
 なな



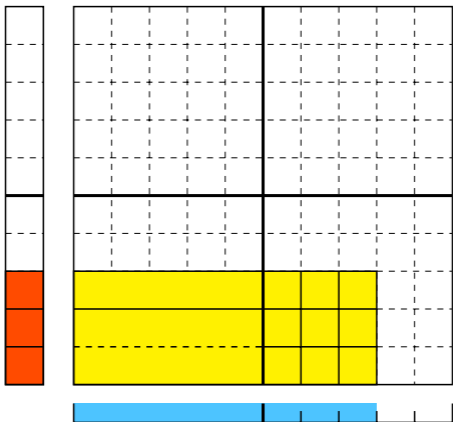
さん しち にじゅういち
3 × **7** = **21**
 さん なな にじゅういち



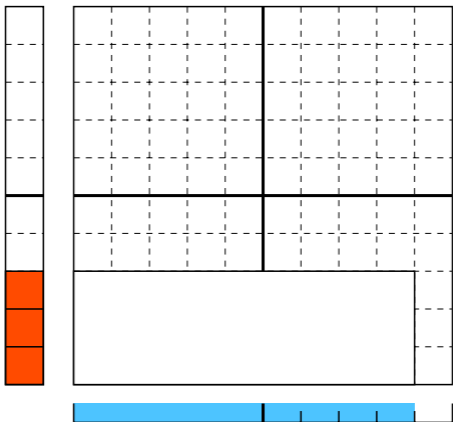
さん さん
3 × 8 = ?
さん はち



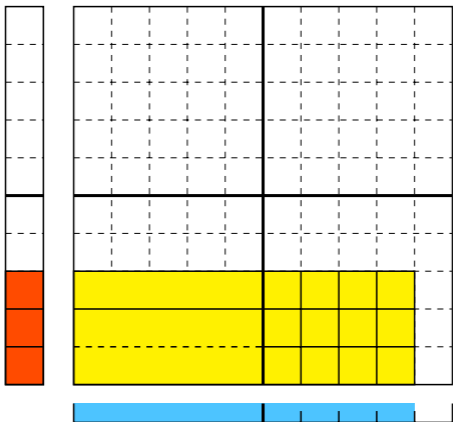
さん ぱ にじゅうし
 3 × 8 = 24
 さん はち にじゅうよん



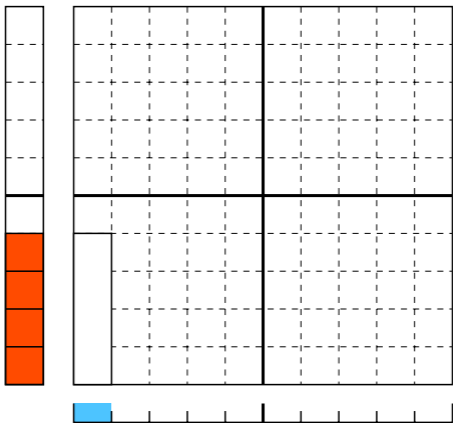
$$\begin{array}{c} \text{さん} \\ 3 \\ \text{さん} \end{array} \times \begin{array}{c} \text{く} \\ 9 \\ \text{きゅう} \end{array} = ?$$



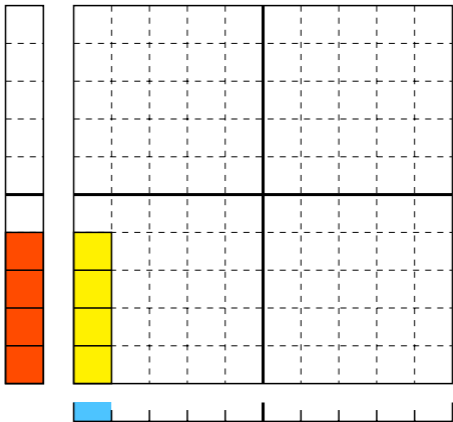
$$\begin{array}{ccccccc}
 \text{さん} & & \text{く} & & \text{にじゅうしち} \\
 3 & \times & 9 & = & 27 \\
 \text{さん} & & \text{きゅう} & & \text{にじゅうなな}
 \end{array}$$



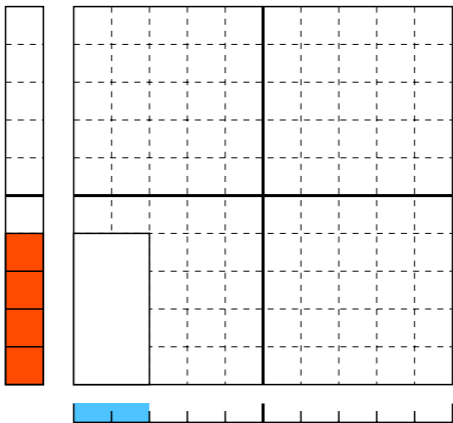
$$\begin{array}{c} \text{し} \\ 4 \\ \text{よん} \end{array} \times \begin{array}{c} \text{いち} \\ | \\ \text{いち} \end{array} = \begin{array}{c} \text{が} \\ = \\ \text{が} \end{array} ?$$



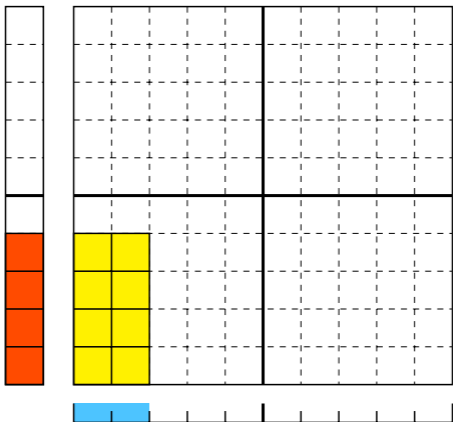
$$\begin{array}{cccc} \text{し} & & \text{いち} & \text{が} & \text{し} \\ 4 & \times & | & = & 4 \\ \text{よん} & & \text{いち} & & \text{よん} \end{array}$$



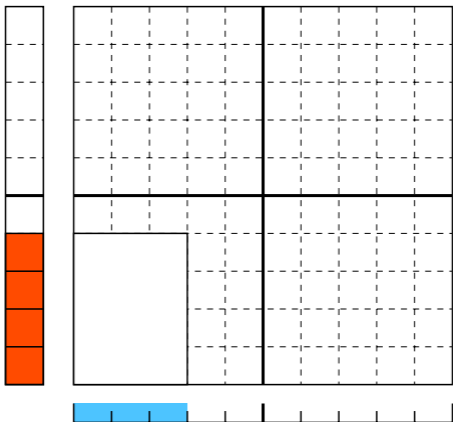
$$\begin{array}{c} \text{し} \\ 4 \\ \text{よん} \end{array} \times \begin{array}{c} \text{に} \\ 2 \\ \text{に} \end{array} = \begin{array}{c} \text{が} \\ ? \\ \text{が} \end{array}$$



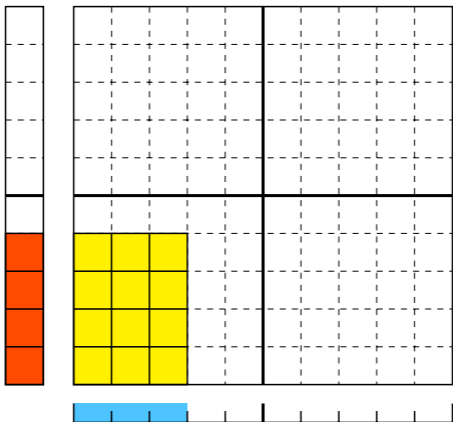
し に が はち
4 × 2 = 8
よん に が はち



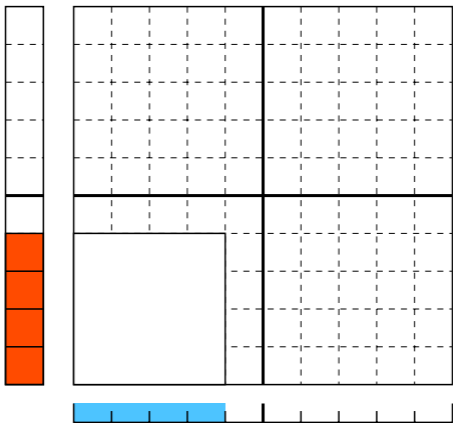
$$\begin{array}{c} \text{し} \\ 4 \\ \text{よん} \end{array} \times \begin{array}{c} \text{さん} \\ 3 \\ \text{さん} \end{array} = ?$$



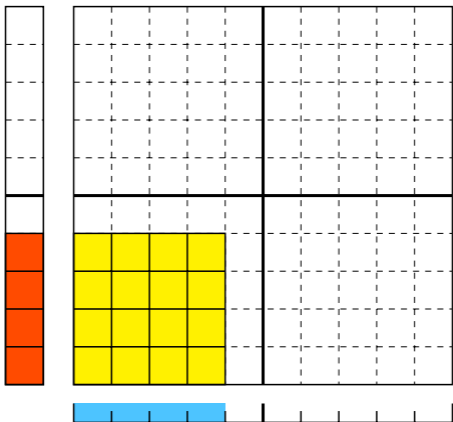
$$\begin{array}{c} \text{し} \\ 4 \\ \text{よん} \end{array} \times \begin{array}{c} \text{さん} \\ 3 \\ \text{さん} \end{array} = \begin{array}{c} \text{じゅうに} \\ 12 \\ \text{じゅうに} \end{array}$$



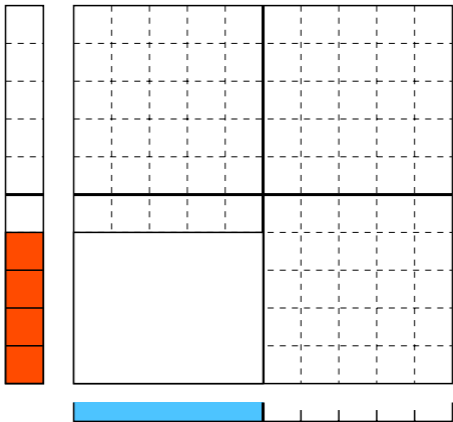
$$\begin{array}{c} \text{し} \\ 4 \\ \text{よん} \end{array} \times \begin{array}{c} \text{し} \\ 4 \\ \text{よん} \end{array} = ?$$



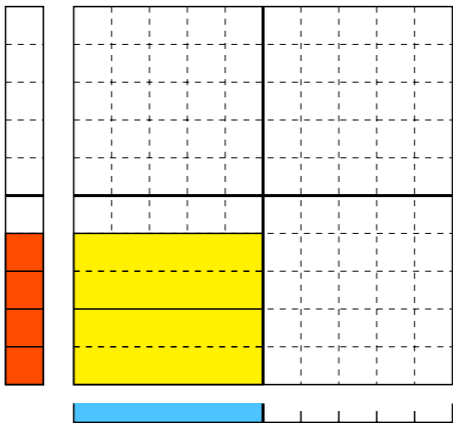
$$\begin{array}{c} \text{し} \\ 4 \\ \text{よん} \end{array} \times \begin{array}{c} \text{し} \\ 4 \\ \text{よん} \end{array} = \begin{array}{c} \text{じゅうろく} \\ 16 \\ \text{じゅうろく} \end{array}$$



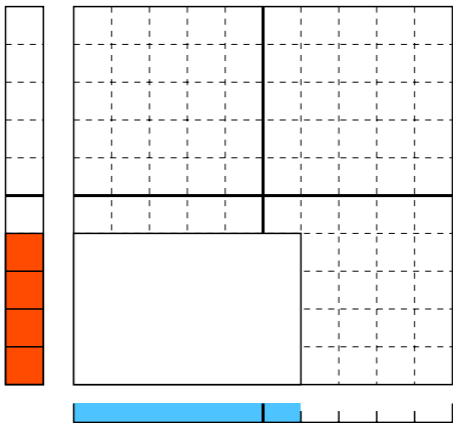
$$\begin{array}{c} \text{し} \\ 4 \\ \text{よん} \end{array} \times \begin{array}{c} \text{ご} \\ 5 \\ \text{ご} \end{array} = ?$$



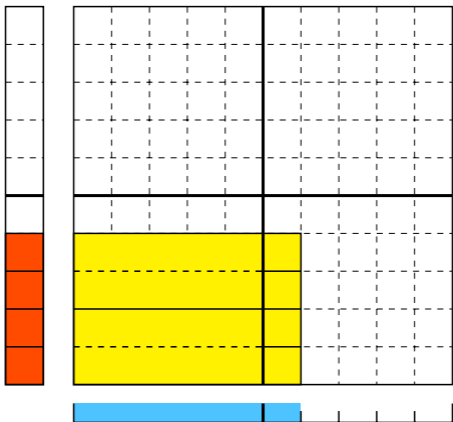
$$\begin{array}{c} \text{し} \\ 4 \\ \text{よん} \end{array} \times \begin{array}{c} \text{ご} \\ 5 \\ \text{ご} \end{array} = \begin{array}{c} \text{にじゅう} \\ 20 \\ \text{にじゅう} \end{array}$$



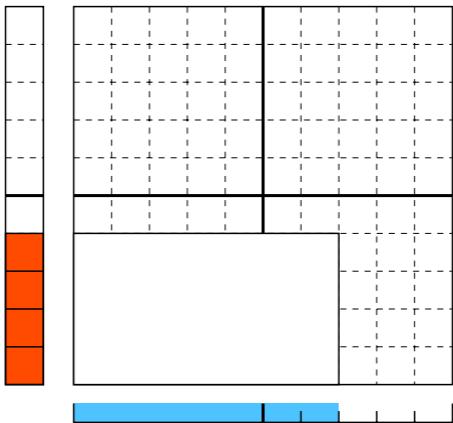
$$\begin{array}{c} \text{し} \\ 4 \\ \text{よん} \end{array} \times \begin{array}{c} \text{ろく} \\ 6 \\ \text{ろく} \end{array} = ?$$



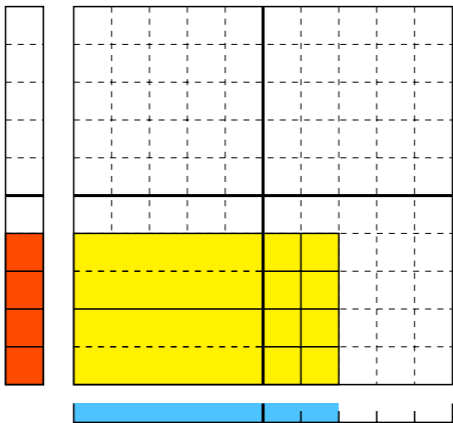
$$\begin{array}{c}
 \text{し} \\
 4 \\
 \text{よん}
 \end{array}
 \times
 \begin{array}{c}
 \text{ろく} \\
 6 \\
 \text{ろく}
 \end{array}
 =
 \begin{array}{c}
 \text{にじゅうし} \\
 24 \\
 \text{にじゅうよん}
 \end{array}$$



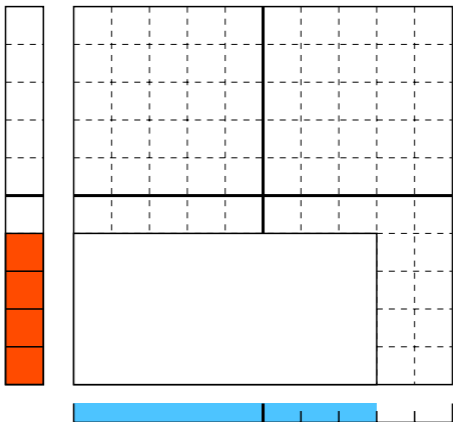
$$\begin{array}{c} \text{し} \\ 4 \\ \text{よん} \end{array} \times \begin{array}{c} \text{しち} \\ 7 \\ \text{なな} \end{array} = ?$$



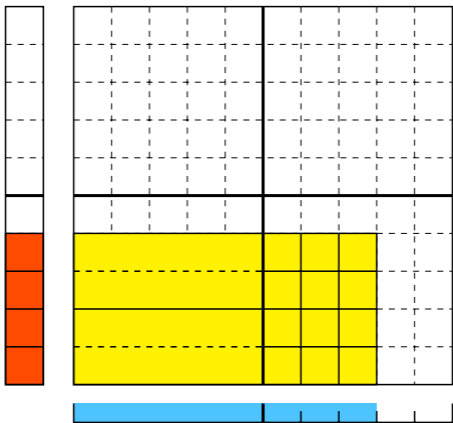
$$\begin{array}{c}
 \text{し} \\
 4 \\
 \text{よん}
 \end{array}
 \times
 \begin{array}{c}
 \text{しち} \\
 7 \\
 \text{なな}
 \end{array}
 =
 \begin{array}{c}
 \text{にじゅうはち} \\
 28 \\
 \text{にじゅうはち}
 \end{array}$$



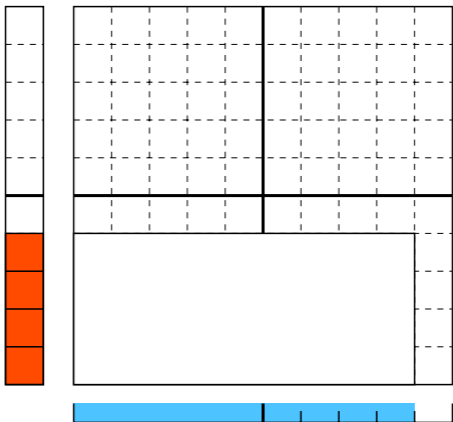
$$\begin{array}{c} \text{し} \\ 4 \\ \text{よん} \end{array} \times \begin{array}{c} \text{は} \\ 8 \\ \text{はち} \end{array} = ?$$



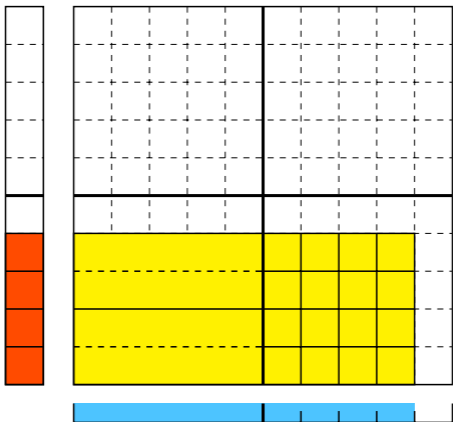
し は さんじゅうに
4 × 8 = 32
よん はち さんじゅうに



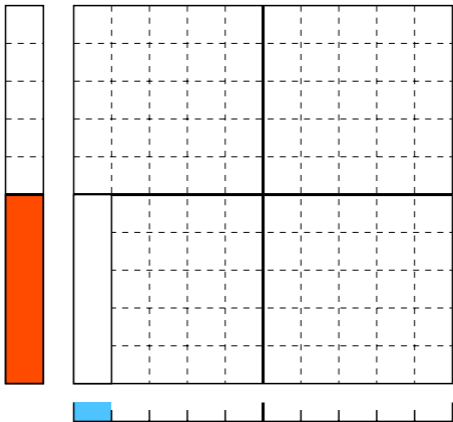
$$\begin{array}{c} \text{し} \\ 4 \\ \text{よん} \end{array} \times \begin{array}{c} \text{く} \\ 9 \\ \text{きゅう} \end{array} = ?$$



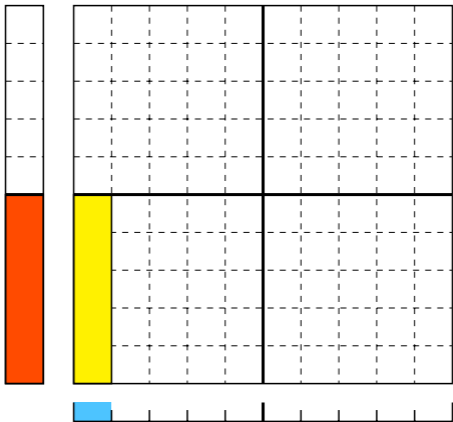
$$\begin{array}{c}
 \text{し} \\
 4 \\
 \text{よん}
 \end{array}
 \times
 \begin{array}{c}
 \text{く} \\
 9 \\
 \text{きゅう}
 \end{array}
 =
 \begin{array}{c}
 \text{さんじゅうろく} \\
 36 \\
 \text{さんじゅうろく}
 \end{array}$$



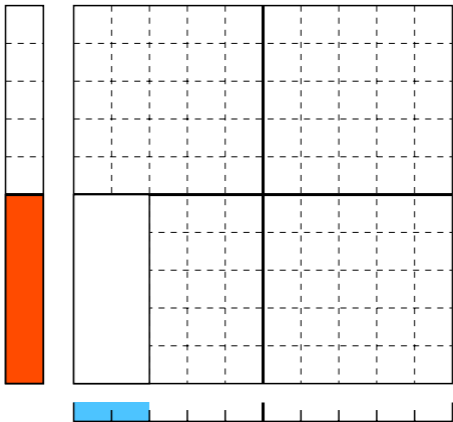
$$\overset{\text{ご}}{5} \times \overset{\text{いち}}{1} \overset{\text{が}}{=} ?$$



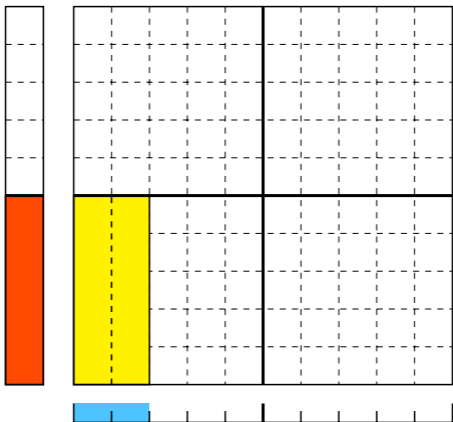
$$\overset{\text{ご}}{5} \times \overset{\text{いち}}{1} = \overset{\text{ご}}{5}$$



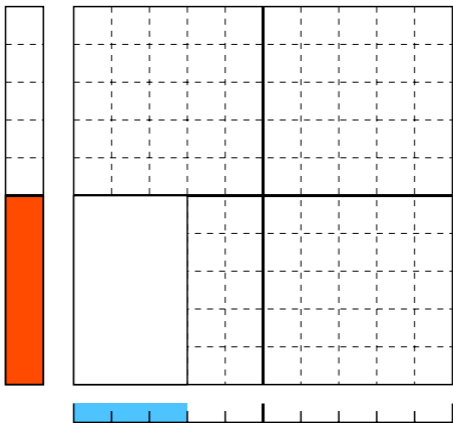
$$5 \times 2 = ?$$



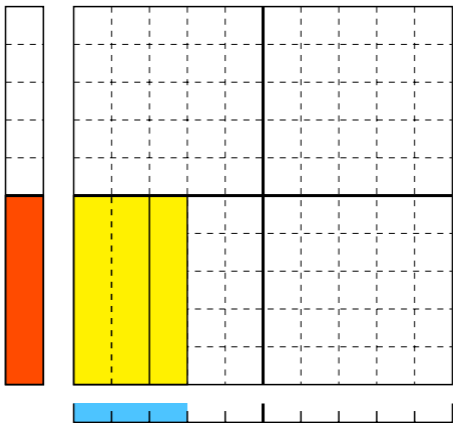
$$\overset{\text{ご}}{5} \times \overset{\text{に}}{2} = \overset{\text{じゅう}}{10}$$



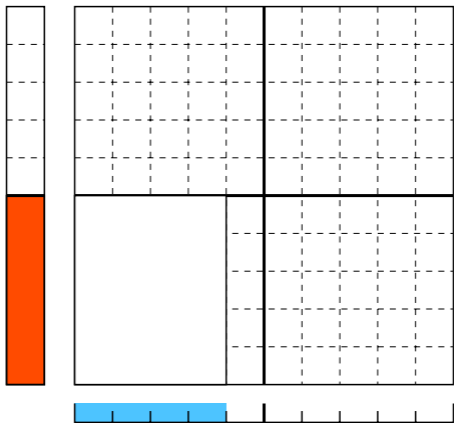
$$\overset{\text{ご}}{5} \times \overset{\text{さん}}{3} = ?$$



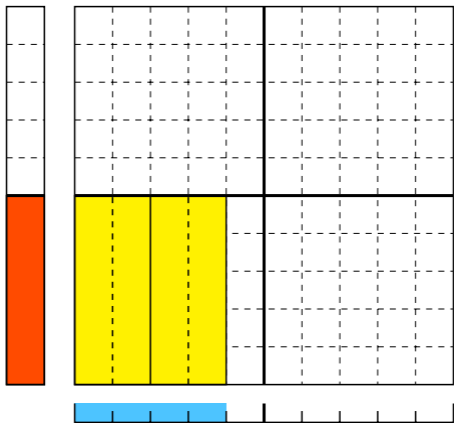
$$\overset{\text{ご}}{5} \times \overset{\text{さん}}{3} = \overset{\text{じゅうご}}{15}$$



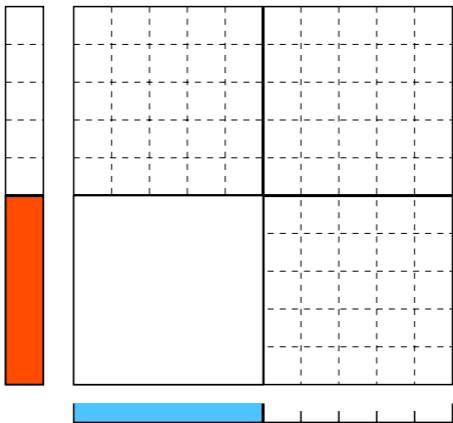
$$\begin{array}{c} \text{ご} \\ 5 \\ \text{ご} \end{array} \times \begin{array}{c} \text{し} \\ 4 \\ \text{よん} \end{array} = ?$$



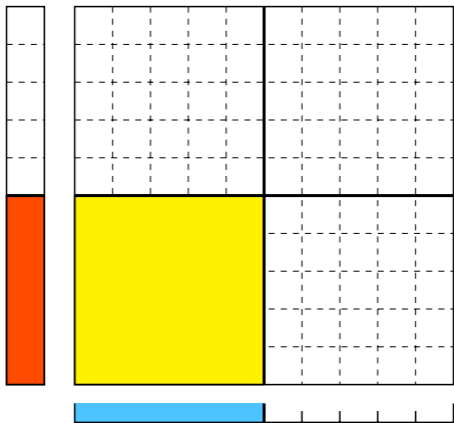
$$\begin{array}{c} \text{ご} \\ 5 \\ \text{ご} \end{array} \times \begin{array}{c} \text{し} \\ 4 \\ \text{よん} \end{array} = \begin{array}{c} \text{にじゅう} \\ 20 \\ \text{にじゅう} \end{array}$$



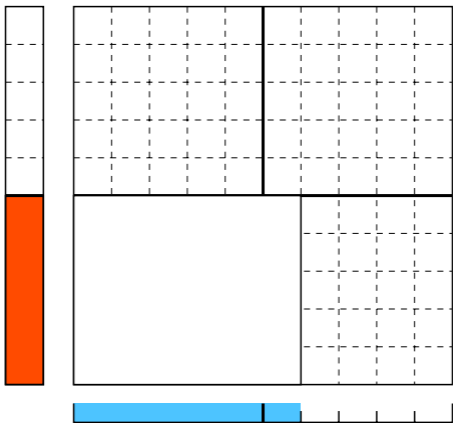
$$5 \times 5 = ?$$



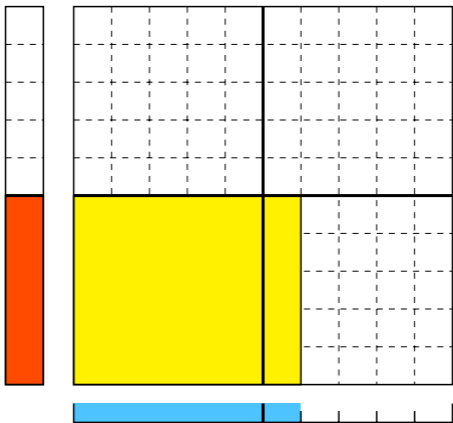
$$\overset{\text{ご}}{5} \times \overset{\text{ご}}{5} = \overset{\text{にじゅうご}}{25}$$



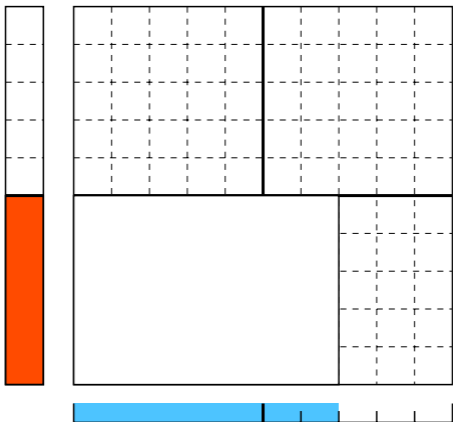
$$\overset{\text{ご}}{5} \times \overset{\text{ろく}}{6} = ?$$



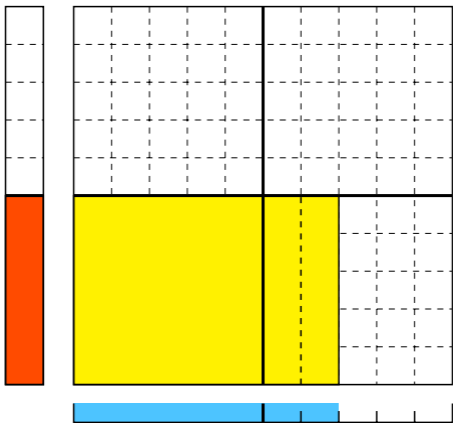
$$\overset{\text{ご}}{5} \times \overset{\text{ろく}}{6} = \overset{\text{さんじゅう}}{30}$$



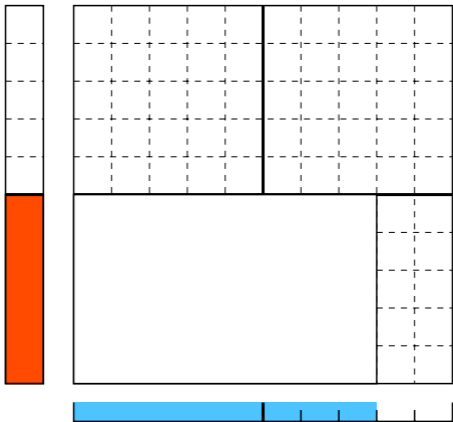
$$\begin{array}{c} \text{ご} \\ 5 \\ \text{ご} \end{array} \times \begin{array}{c} \text{しち} \\ 7 \\ \text{なな} \end{array} = ?$$



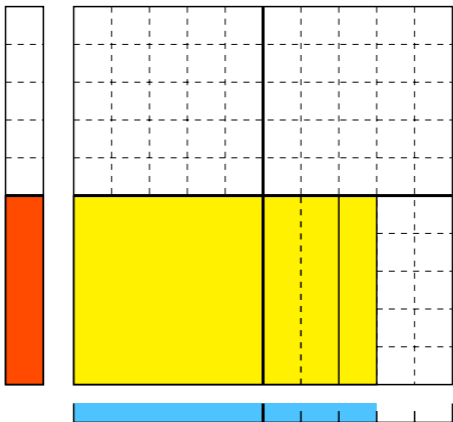
ご しち さんじゅうご
5 × 7 = 35
ご なな さんじゅうご



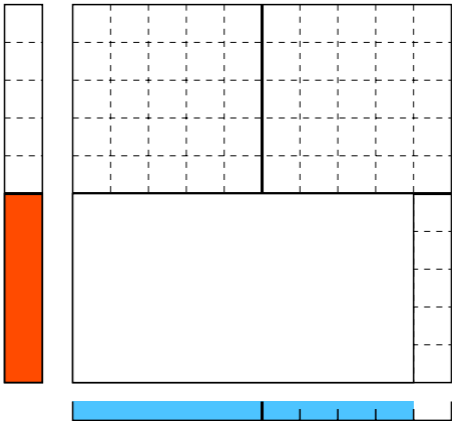
$$\begin{array}{c} \text{ご} \\ 5 \\ \text{ご} \end{array} \times \begin{array}{c} \text{は} \\ 8 \\ \text{はち} \end{array} = ?$$



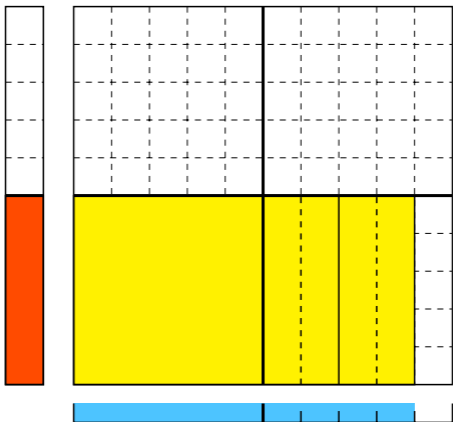
$$\begin{array}{ccccc} \text{ご} & & \text{は} & & \text{しじゅう} \\ \text{5} & \times & \text{8} & = & \text{40} \\ \text{ご} & & \text{はち} & & \text{よんじゅう} \end{array}$$



$$\begin{array}{c} \text{ご} \\ 5 \\ \text{ご} \end{array} \times \begin{array}{c} \text{く} \\ 9 \\ \text{きゅう} \end{array} = ?$$

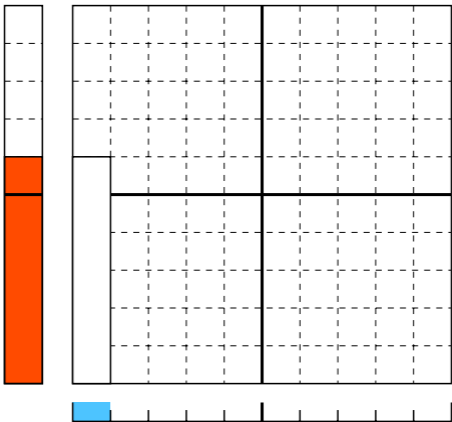


$$\begin{array}{c}
 \text{ごっ} \\
 5 \\
 \text{ご}
 \end{array}
 \times
 \begin{array}{c}
 \text{く} \\
 9 \\
 \text{きゅう}
 \end{array}
 =
 \begin{array}{c}
 \text{しじゅうご} \\
 45 \\
 \text{よんじゅうご}
 \end{array}$$

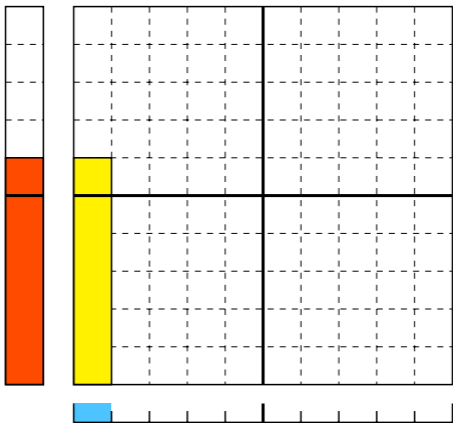


ろく × いち が ?

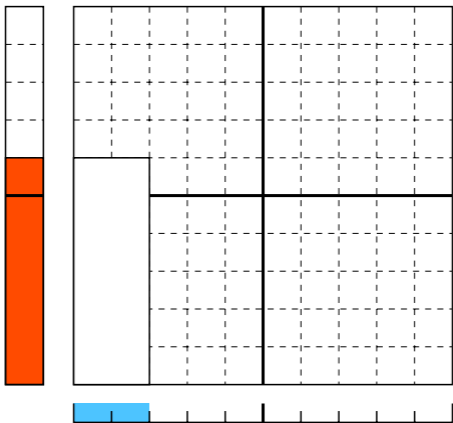
$$6 \times 1 = ?$$



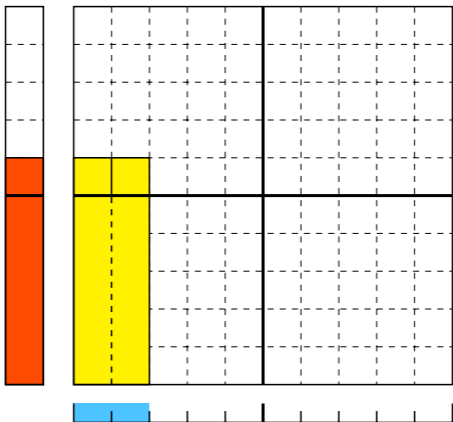
$$\begin{array}{cccc} \text{ろく} & & \text{いち} & \text{が} & \text{ろく} \\ 6 & \times & 1 & = & 6 \end{array}$$



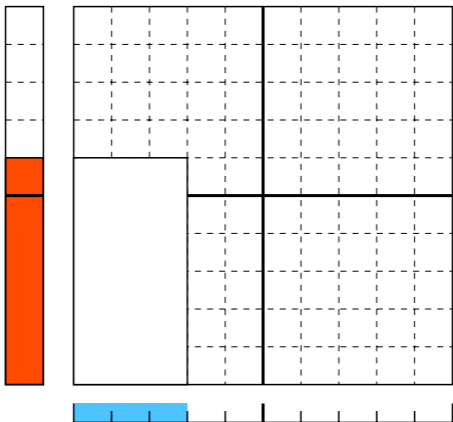
$$\overset{\text{ろく}}{6} \times \overset{\text{に}}{2} = ?$$



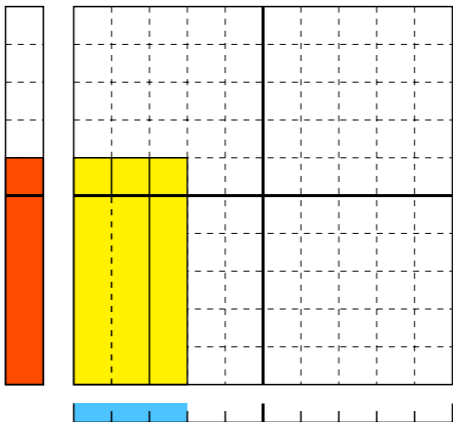
$$\overset{\text{ろく}}{6} \times \overset{\text{に}}{2} = \overset{\text{じゅうに}}{12}$$



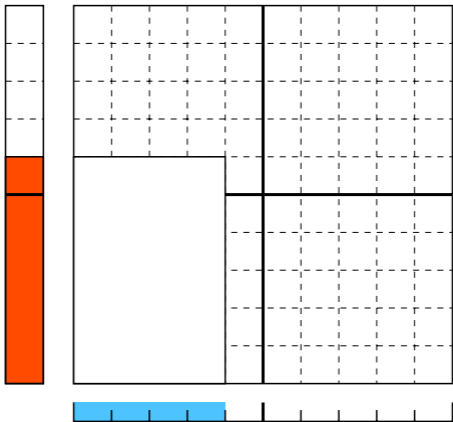
$$\overset{\text{ろく}}{6} \times \overset{\text{さん}}{3} = ?$$



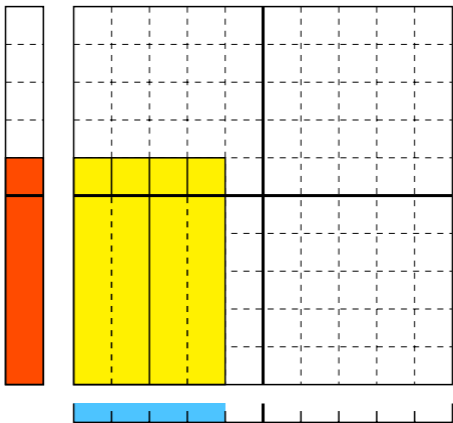
ろく さん じゅうはち
6 × 3 = 18



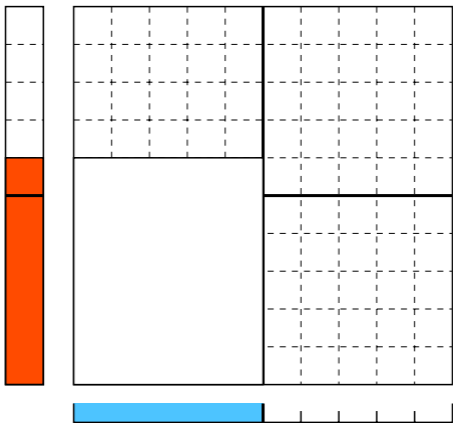
$$\begin{array}{c} \text{ろく} \\ 6 \\ \text{ろく} \end{array} \times \begin{array}{c} \text{し} \\ 4 \\ \text{よん} \end{array} = ?$$



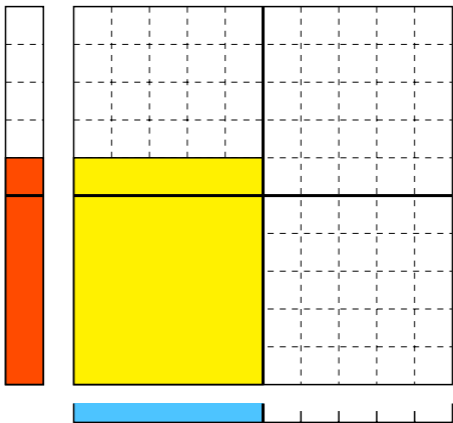
$$\begin{array}{c}
 \text{ろく} \\
 6 \\
 \text{ろく}
 \end{array}
 \times
 \begin{array}{c}
 \text{し} \\
 4 \\
 \text{よん}
 \end{array}
 =
 \begin{array}{c}
 \text{にじゅうし} \\
 24 \\
 \text{にじゅうよん}
 \end{array}$$



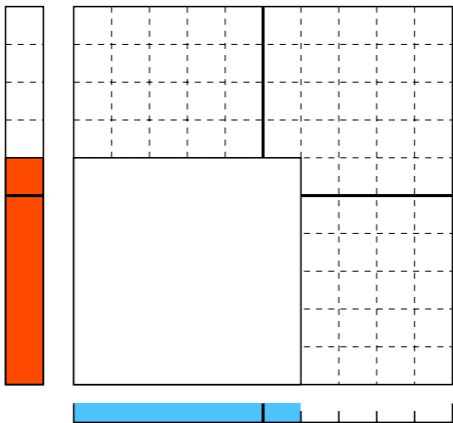
$$\overset{\text{ろく}}{6} \times \overset{\text{ご}}{5} = ?$$



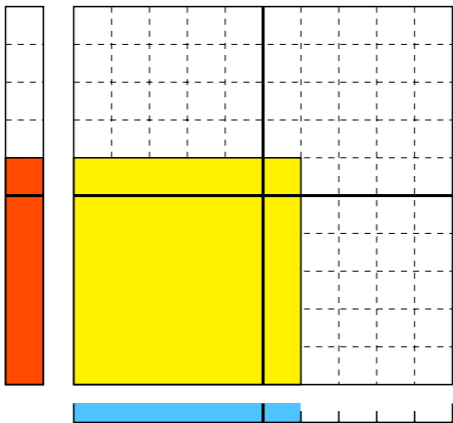
$$\begin{array}{c} \text{ろく} \\ 6 \end{array} \times \begin{array}{c} \text{ご} \\ 5 \end{array} = \begin{array}{c} \text{さんじゅう} \\ 30 \end{array}$$



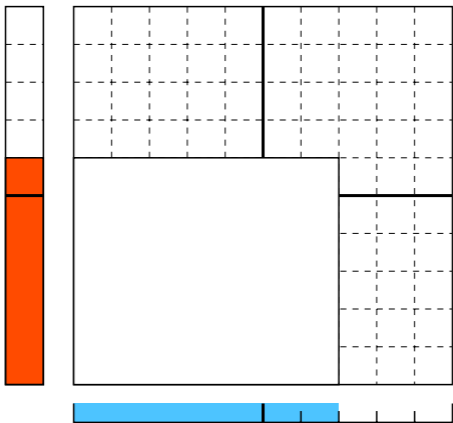
$$\overset{3<}{6} \times \overset{3<}{6} = ?$$



$$\begin{array}{c} \text{ろく} \\ 6 \end{array} \times \begin{array}{c} \text{ろく} \\ 6 \end{array} = \begin{array}{c} \text{さんじゅうろく} \\ 36 \end{array}$$



$$\begin{array}{c} \text{ろく} \\ 6 \\ \text{ろく} \end{array} \times \begin{array}{c} \text{しち} \\ 7 \\ \text{なな} \end{array} = ?$$



ろく

6

ろく

×

しち

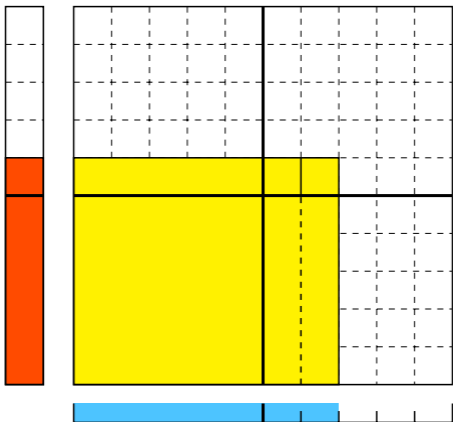
7

なな

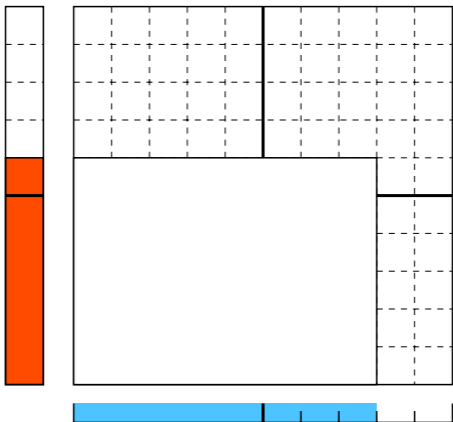
しじゅうに

= 42

よんじゅうに



$$\begin{array}{c} \text{ろく} \\ 6 \\ \text{ろく} \end{array} \times \begin{array}{c} \text{はち} \\ 8 \\ \text{はち} \end{array} = ?$$



ろく

6

ろく

×

は

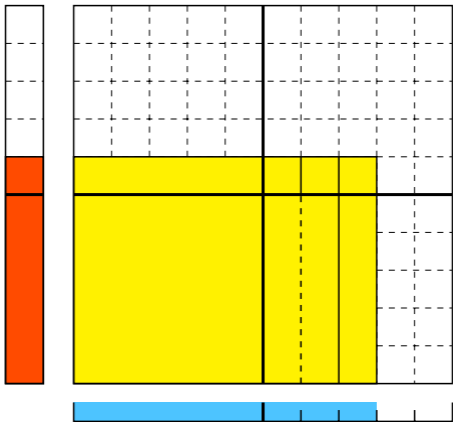
8

はち

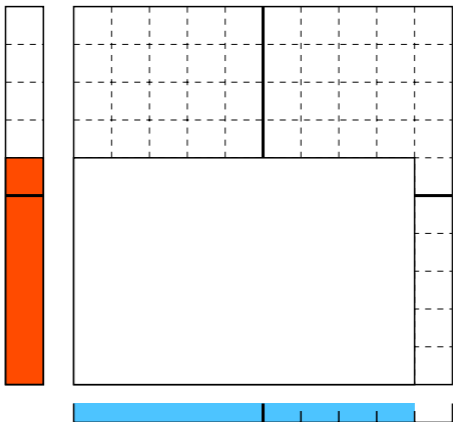
しじゅうはち

= 48

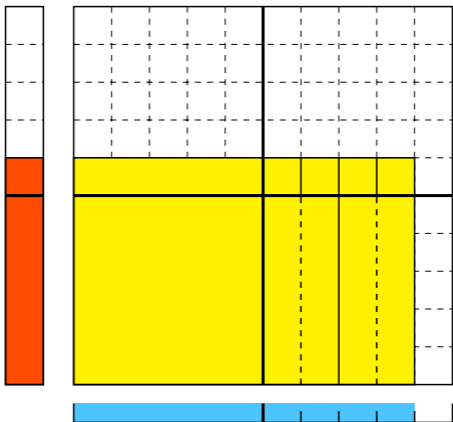
よんじゅうはち



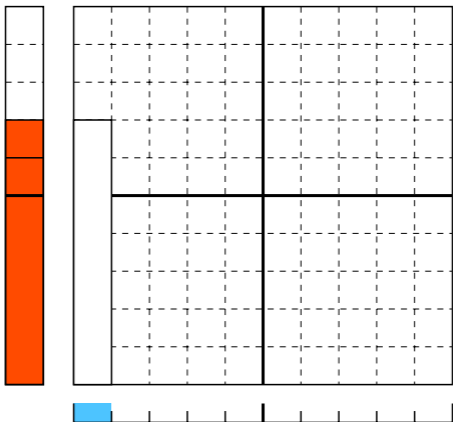
$$\begin{array}{c}
 \text{ろっ} \\
 6 \\
 \text{ろく}
 \end{array}
 \times
 \begin{array}{c}
 \text{く} \\
 9 \\
 \text{きゅう}
 \end{array}
 = ?$$



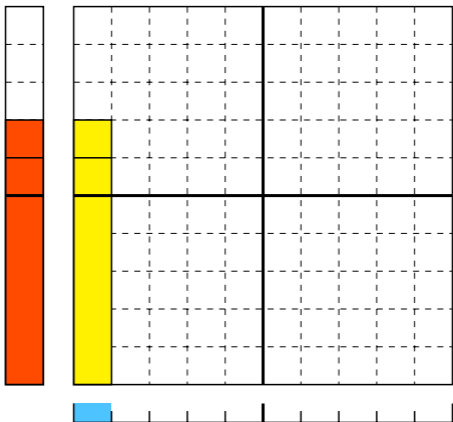
$$\begin{array}{ccccccc}
 \text{ろっ} & & \text{く} & & \text{ごじゅうし} \\
 6 & \times & 9 & = & 54 \\
 \text{ろく} & & \text{きゅう} & & \text{ごじゅうよん}
 \end{array}$$



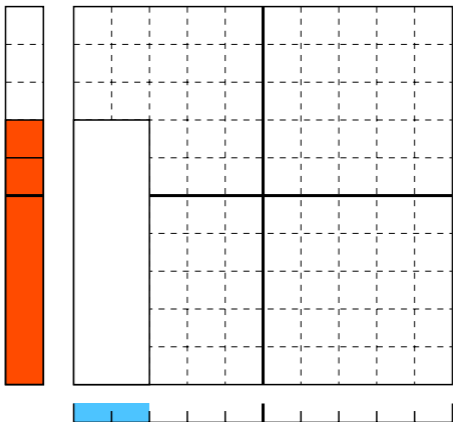
しち 7 × いち 1 = が ?
なな いち が



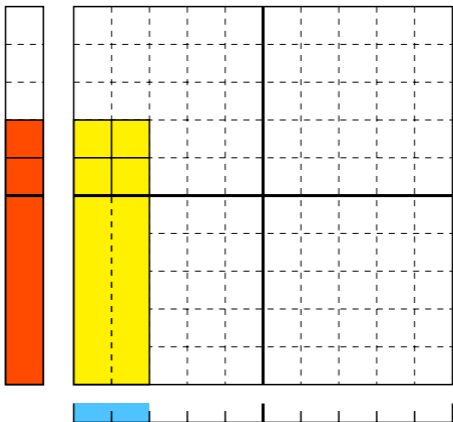
しち 7 × いち 1 = しち 7
なな なな



しち
7 × に 2 = ?
なな に



しち
7 × に 2 = じゅうし
じゅうよん
なな に じゅうよん

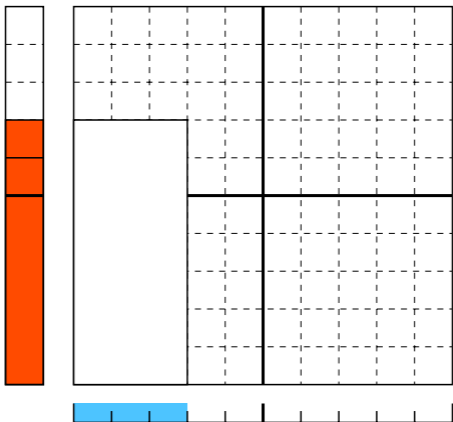


しち
7
なな

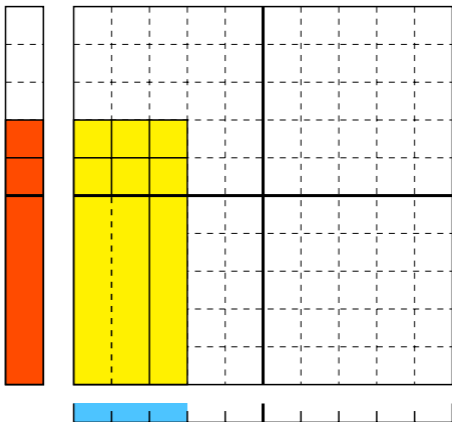
×

さん
3
さん

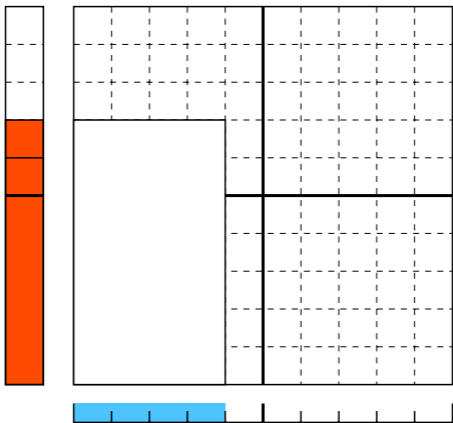
= ?



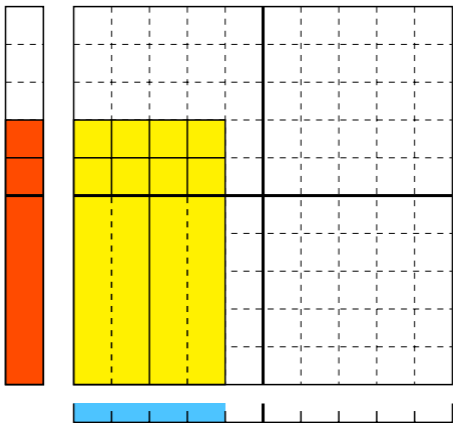
しち さん にじゅういち
 7 × 3 = 21
 なな さん にじゅういち



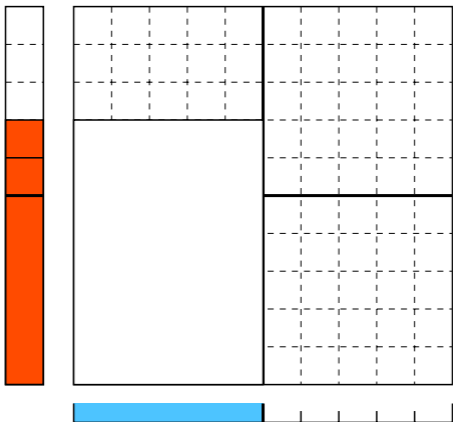
$$\begin{array}{c} \text{しち} \\ 7 \\ \text{なな} \end{array} \times \begin{array}{c} \text{し} \\ 4 \\ \text{よん} \end{array} = ?$$



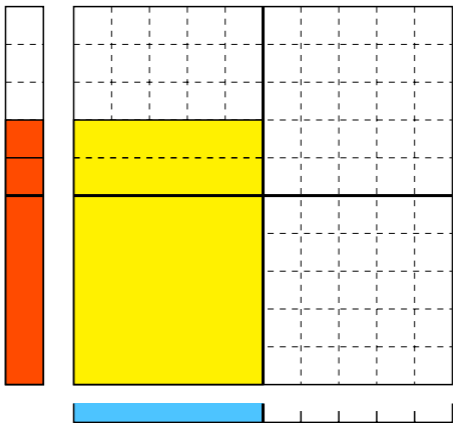
しち し にじゅうはち
 7 × 4 = 28
 なな よん にじゅうはち



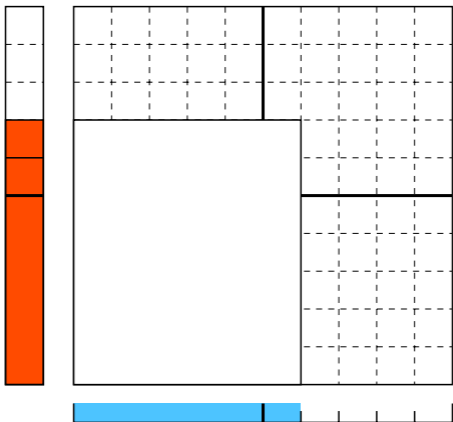
$$\begin{array}{c} \text{しち} \\ 7 \\ \text{なな} \end{array} \times \begin{array}{c} \text{ご} \\ 5 \\ \text{ご} \end{array} = ?$$



しち 7 × ご 5 = さんじゅうご 35
なな ご さんじゅうご



しち
7 × ろく
なな 6 = ?
ろく



しち

7

なな

×

ろく

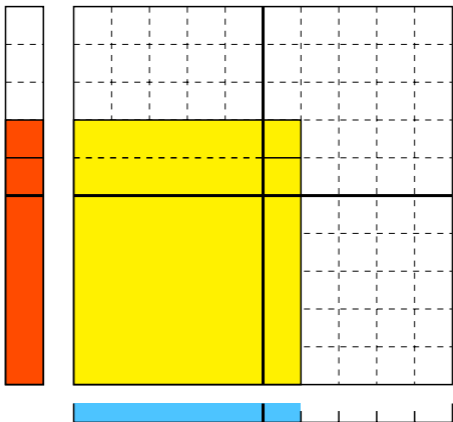
6

ろく

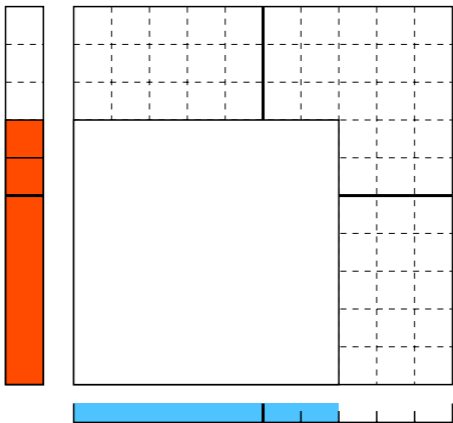
しじゅうに

= 42

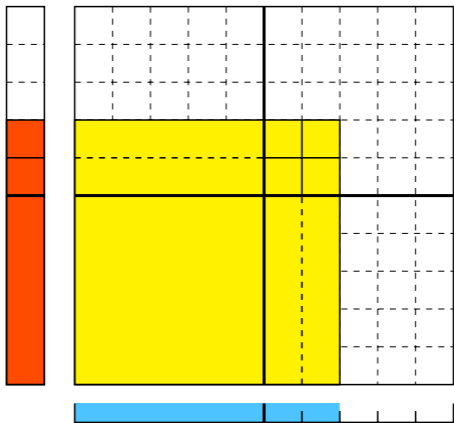
よんじゅうに



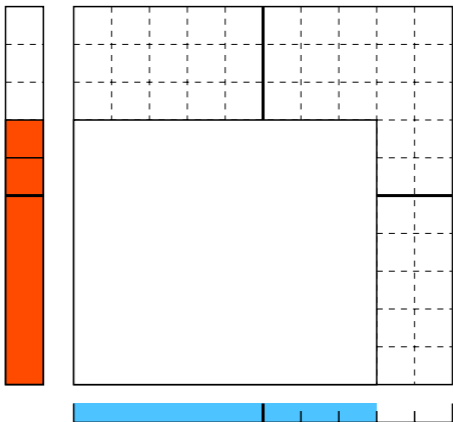
$$\begin{array}{c} \text{しち} \\ 7 \\ \text{なな} \end{array} \times \begin{array}{c} \text{しち} \\ 7 \\ \text{なな} \end{array} = ?$$



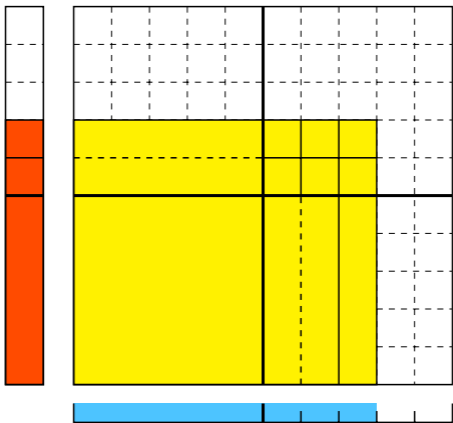
$$\begin{array}{c}
 \text{しち} \\
 7 \\
 \text{なな}
 \end{array}
 \times
 \begin{array}{c}
 \text{しち} \\
 7 \\
 \text{なな}
 \end{array}
 =
 \begin{array}{c}
 \text{しじゅうく} \\
 49 \\
 \text{よんじゅうきゅう}
 \end{array}$$



しち
7 × は
8 = ?
なな はち

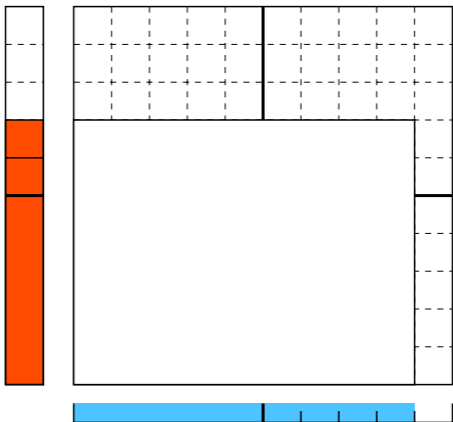


しち は ごじゅうろく
 7 × 8 = 56
 なな はち ごじゅうろく

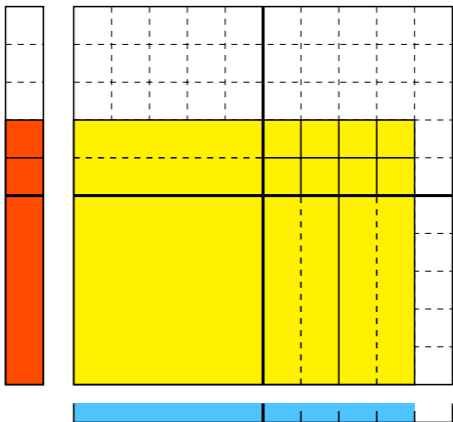


$$\begin{array}{c} \text{しち} \\ 7 \end{array} \times \begin{array}{c} \text{く} \\ 9 \end{array} = ?$$

なな きゅう

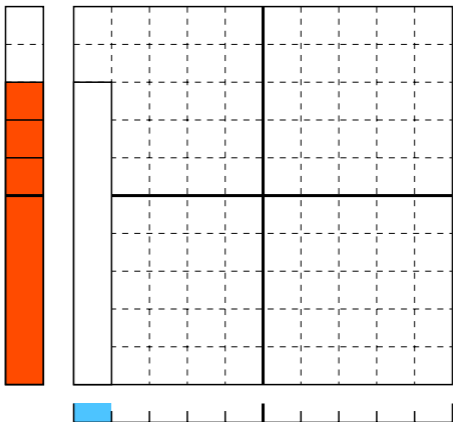


しち く ろくじゅうさん
 7 × 9 = 63
 なな きゅう ろくじゅうさん



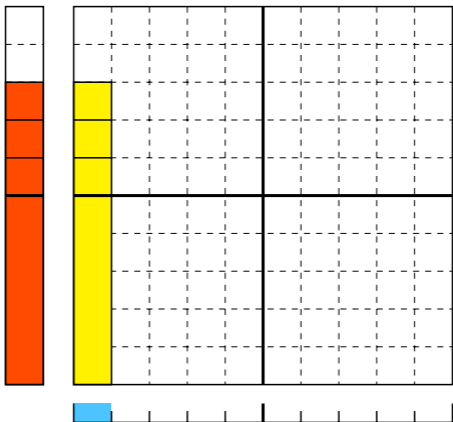
はち × いち が ?

$$8 \times 1 = ?$$

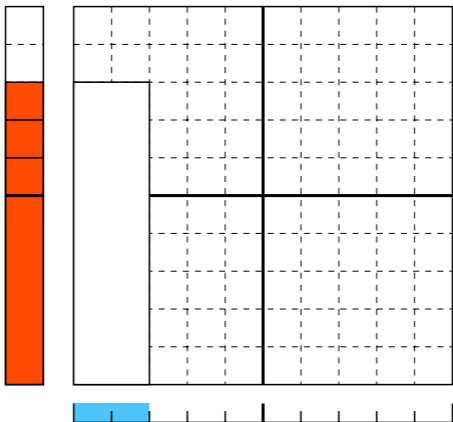


はち × いち が はち

$$8 \times 1 = 8$$

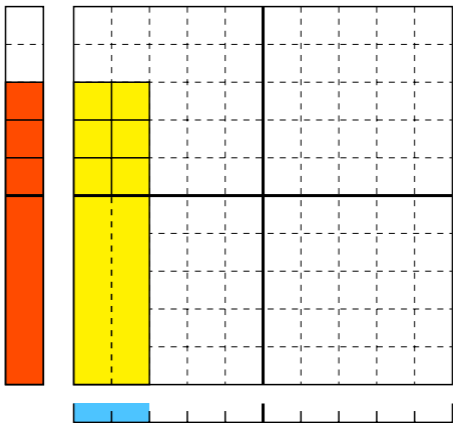


はち
8 × に
2 = ?



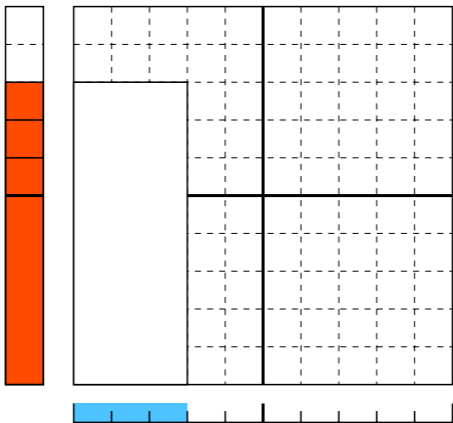
はち に じゅうろく

$$8 \times 2 = 16$$

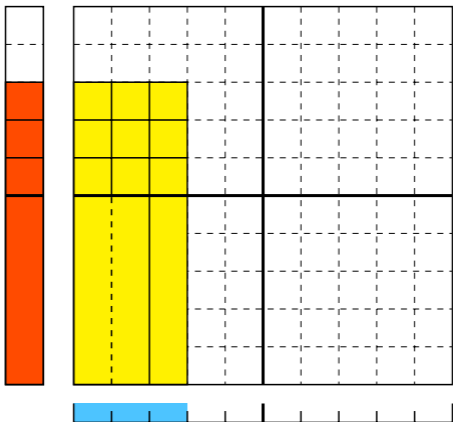


はっ
8 × 3 = ?
はち

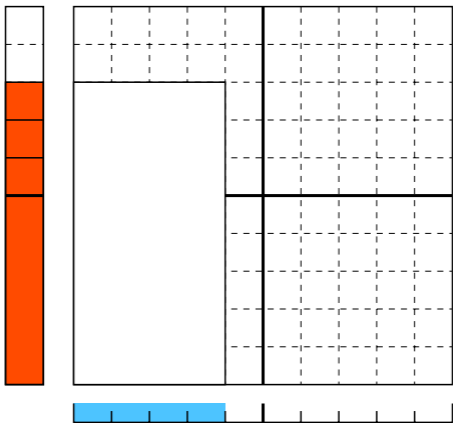
さん
3
さん



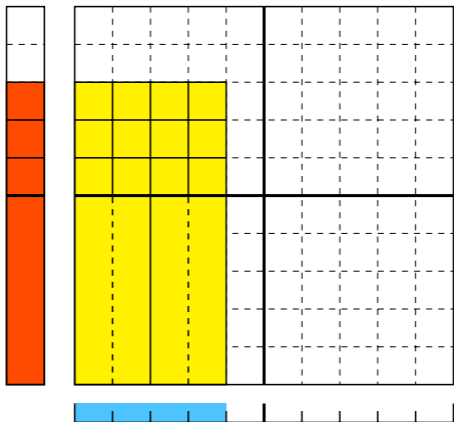
はっ さん にじゅうし
8 × 3 = 24
はち さん にじゅうよん



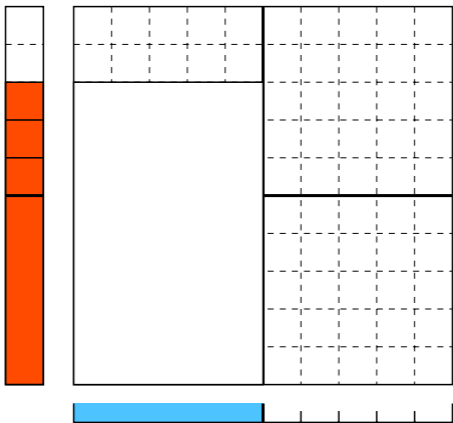
はっ
8 × し
はち 4 = ?
よん



はっ し さんじゅうに
8 × 4 = 32
はち よん さんじゅうに



はち
8 × ご
5 = ?



はち

8

×

ご

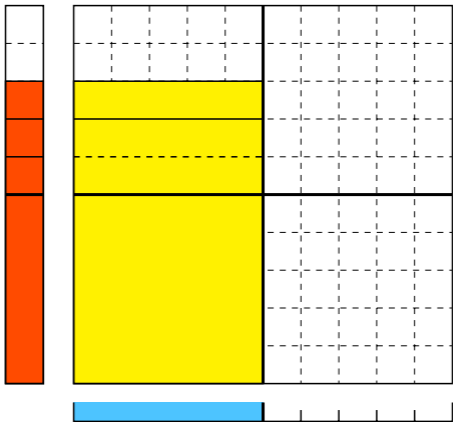
5

=

しじゅう

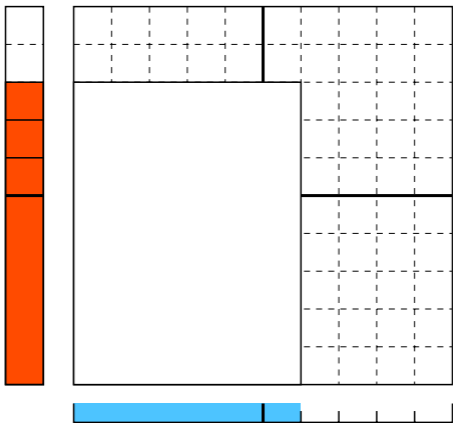
40

よんじゅう



はち × ろく = ?

$$8 \times 6 = ?$$



はち

8

×

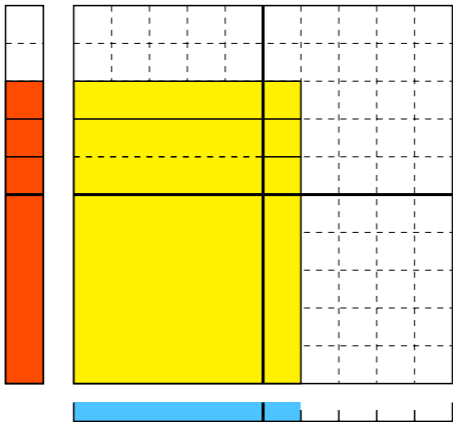
ろく

6

しじゅうはち

= 48

よんじゅうはち



はち

8

はち

×

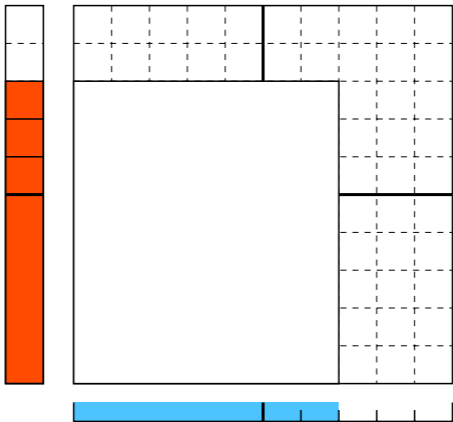
しち

7

なな

=

?



はち

8

はち

×

しち

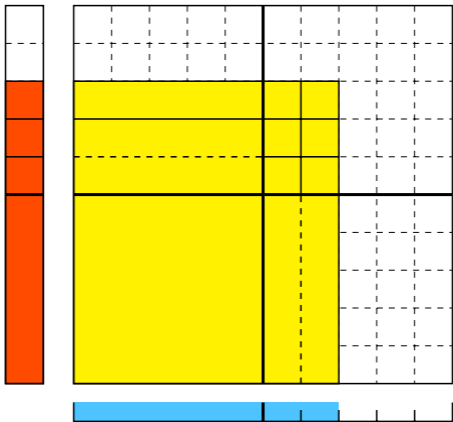
7

なな

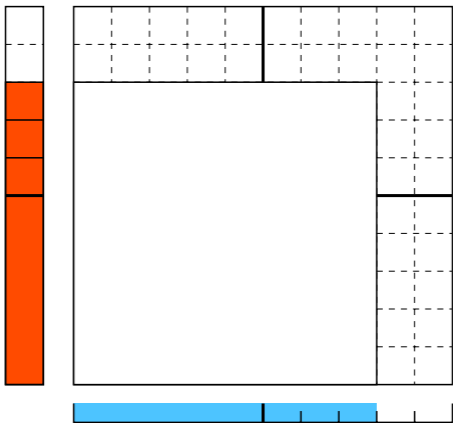
ごじゅうろく

= 56

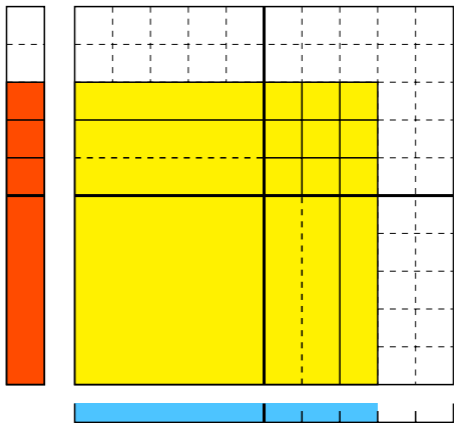
ごじゅうろく



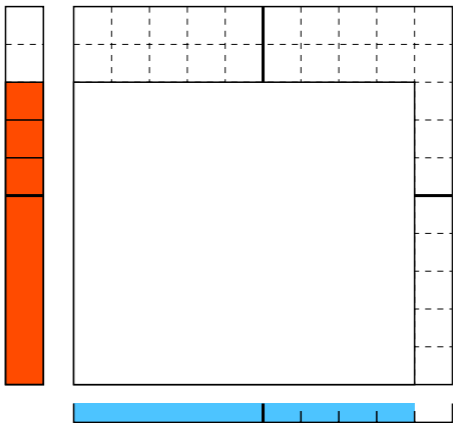
はっ
8 × 8 = ?
はち



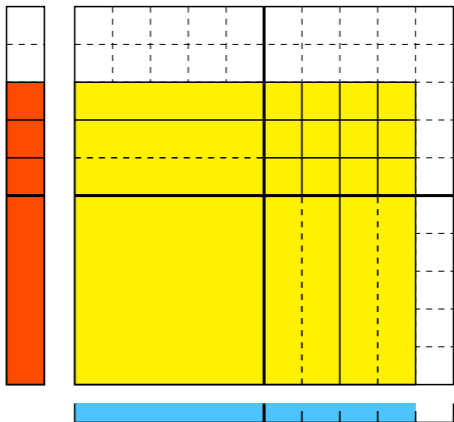
はっ ぱ ろくじゅうし
 8 × 8 = 64
 はち はち ろくじゅうよん



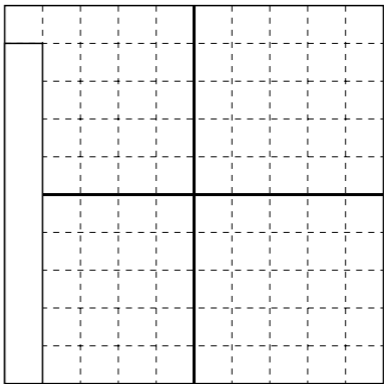
はっ
8 × 9 = ?
はち きゅう



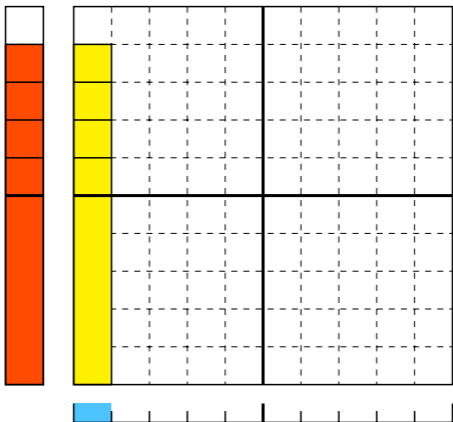
$$\begin{array}{ccccccc}
 \text{はっ} & & \text{く} & & \text{しちじゅうに} \\
 8 & \times & 9 & = & 72 \\
 \text{はち} & & \text{きゅう} & & \text{ななじゅうに}
 \end{array}$$



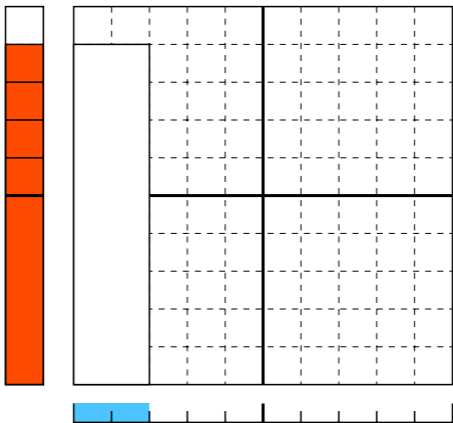
く いち が
9 × 1 = ?
きゅう いち が



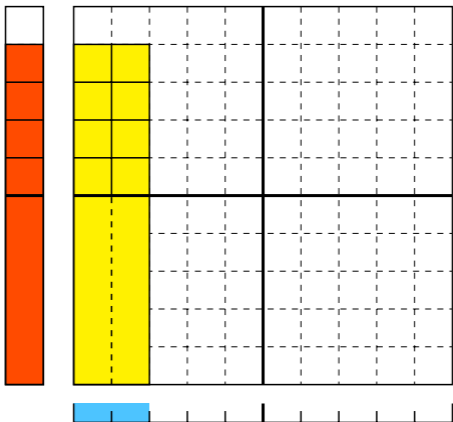
く いち が く
9 × | = 9
きゅう いち が きゅう



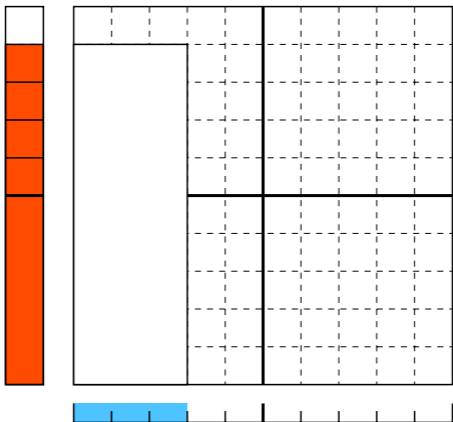
$$\begin{array}{c} \text{く} \\ 9 \\ \text{きゅう} \end{array} \times \begin{array}{c} \text{に} \\ 2 \\ \text{に} \end{array} = ?$$



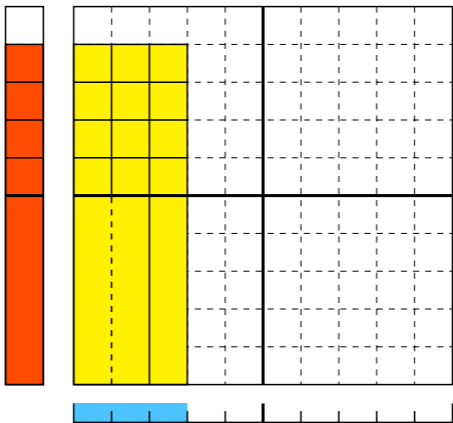
$$\begin{array}{c}
 \text{く} \\
 9 \\
 \text{きゅう}
 \end{array}
 \times
 \begin{array}{c}
 \text{に} \\
 2 \\
 \text{に}
 \end{array}
 =
 \begin{array}{c}
 \text{じゅうはち} \\
 18 \\
 \text{じゅうはち}
 \end{array}$$



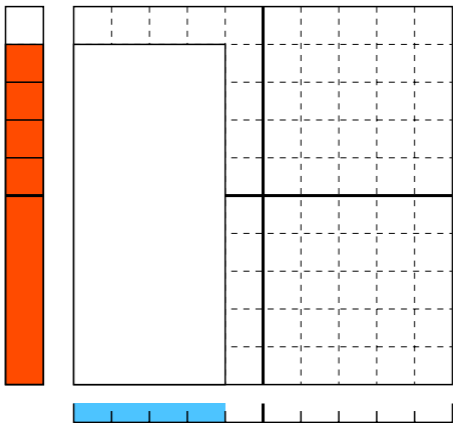
$$\begin{array}{c} \text{く} \\ 9 \\ \text{きゅう} \end{array} \times \begin{array}{c} \text{さん} \\ 3 \\ \text{さん} \end{array} = ?$$



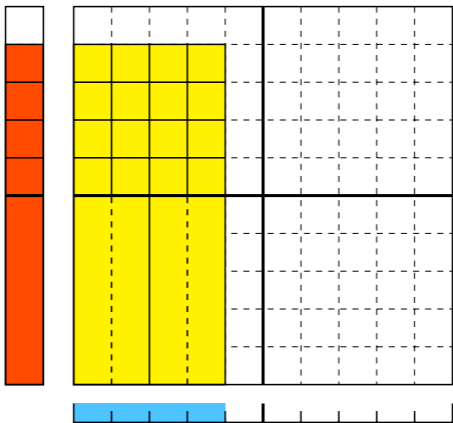
$$\begin{array}{ccc}
 \text{く} & \text{さん} & \text{にじゅうしち} \\
 9 & \times 3 & = 27 \\
 \text{きゅう} & \text{さん} & \text{にじゅうなな}
 \end{array}$$



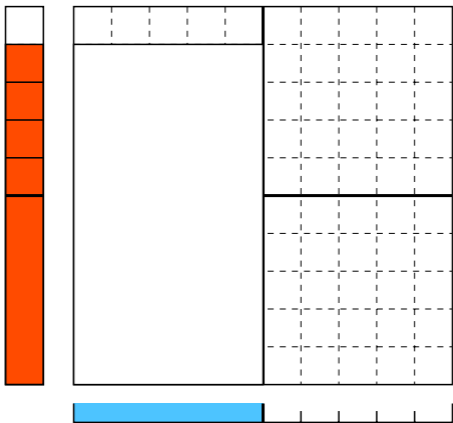
$$\begin{array}{c} \text{く} \\ 9 \\ \text{きゅう} \end{array} \times \begin{array}{c} \text{し} \\ 4 \\ \text{よん} \end{array} = ?$$



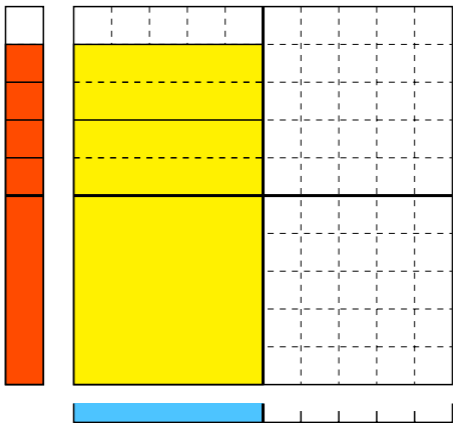
く し さんじゅうろく
9 × 4 = 36
きゅう よん さんじゅうろく



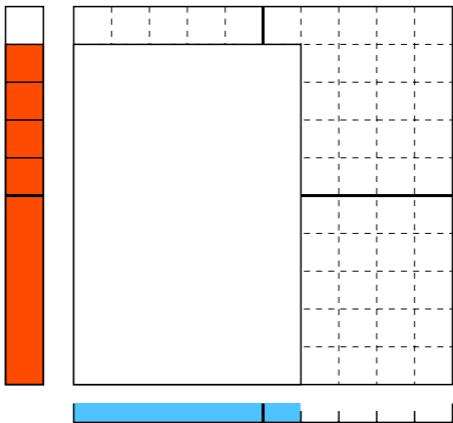
$$\begin{array}{c} \text{く} \\ 9 \\ \text{きゅう} \end{array} \times \begin{array}{c} \text{ご} \\ 5 \\ \text{ご} \end{array} = ?$$



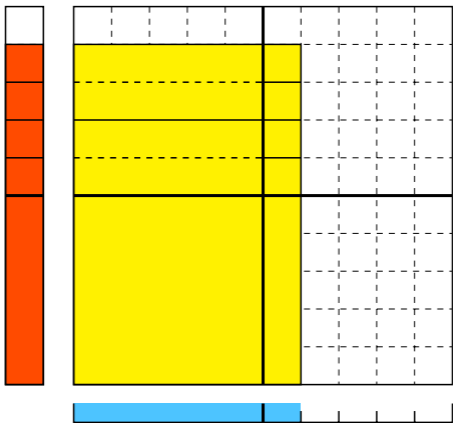
$$\begin{array}{c} \text{く} \\ 9 \\ \text{きゅう} \end{array} \times \begin{array}{c} \text{ご} \\ 5 \\ \text{ご} \end{array} = \begin{array}{c} \text{しじゅうご} \\ 45 \\ \text{よんじゅうご} \end{array}$$



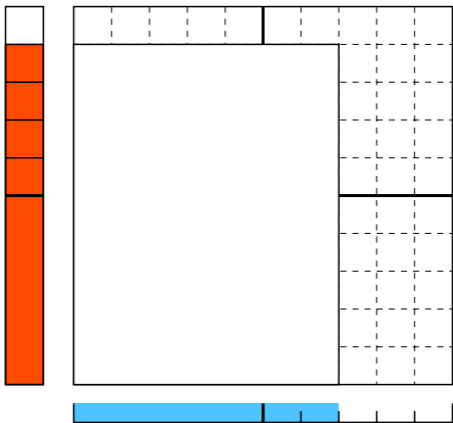
$$\begin{array}{c} \text{く} \\ 9 \\ \text{きゅう} \end{array} \times \begin{array}{c} \text{ろく} \\ 6 \\ \text{ろく} \end{array} = ?$$



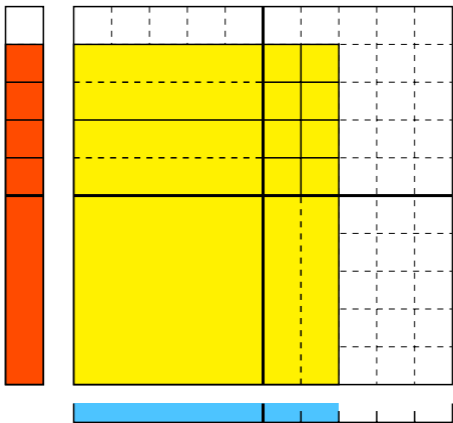
$$\begin{array}{c}
 \text{く} \\
 9 \\
 \text{きゅう}
 \end{array}
 \times
 \begin{array}{c}
 \text{ろく} \\
 6 \\
 \text{ろく}
 \end{array}
 =
 \begin{array}{c}
 \text{ごじゅうし} \\
 54 \\
 \text{ごじゅうよん}
 \end{array}$$



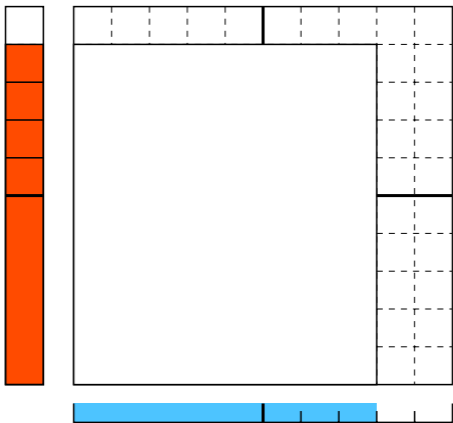
$$\begin{array}{c} \text{く} \\ 9 \\ \text{きゅう} \end{array} \times \begin{array}{c} \text{しち} \\ 7 \\ \text{なな} \end{array} = ?$$



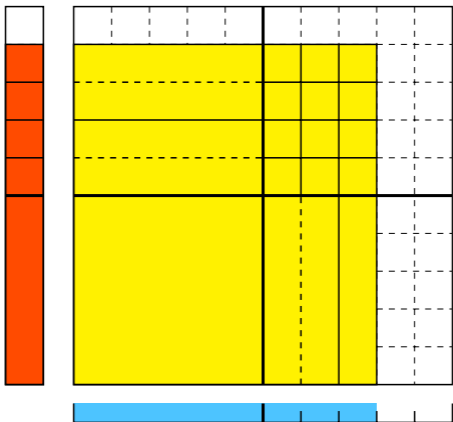
$$\begin{array}{ccc}
 \text{く} & & \text{しち} & & \text{ろくじゅうさん} \\
 9 & \times & 7 & = & 63 \\
 \text{きゅう} & & \text{なな} & & \text{ろくじゅうさん}
 \end{array}$$



$$\begin{array}{c} \text{く} \\ 9 \\ \text{きゅう} \end{array} \times \begin{array}{c} \text{は} \\ 8 \\ \text{はち} \end{array} = ?$$

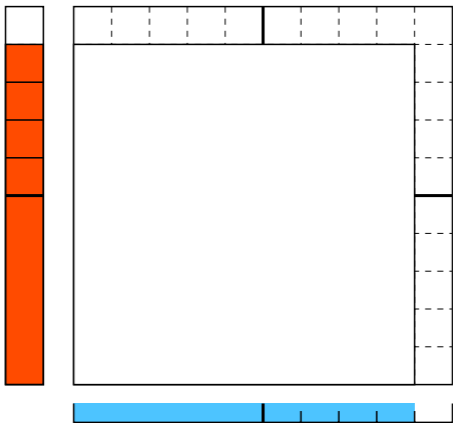


$$\begin{array}{c}
 \text{く} \\
 9 \\
 \text{きゅう}
 \end{array}
 \times
 \begin{array}{c}
 \text{は} \\
 8 \\
 \text{はち}
 \end{array}
 =
 \begin{array}{c}
 \text{しちじゅうに} \\
 72 \\
 \text{ななじゅうに}
 \end{array}$$



$$\overset{\text{く}}{9} \times \overset{\text{く}}{9} = ?$$

きゅう きゅう



$$\begin{array}{ccccccc}
 & \text{く} & & \text{く} & & \text{はちじゅういち} & \\
 \text{9} & \times & \text{9} & = & \text{81} & & \\
 \text{きゅう} & & \text{きゅう} & & \text{はちじゅういち} & &
 \end{array}$$

